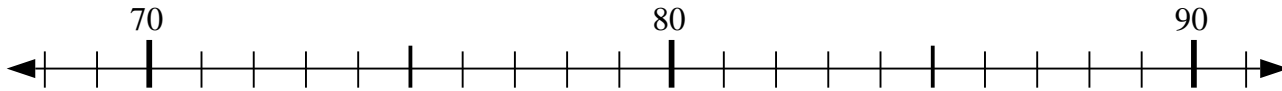


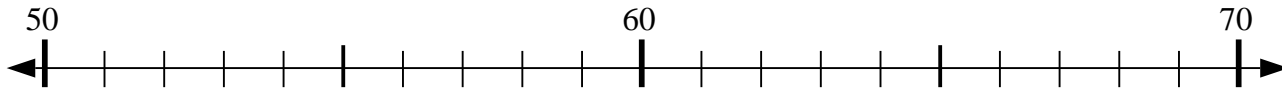


Usa la linea numerata per risolvere il problema.

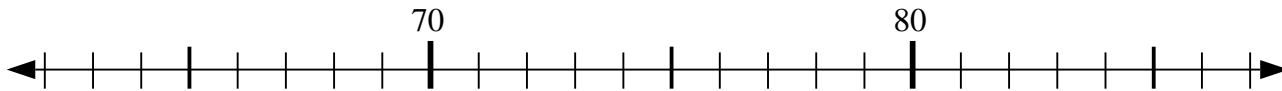
1) $88 - 15 = ?$



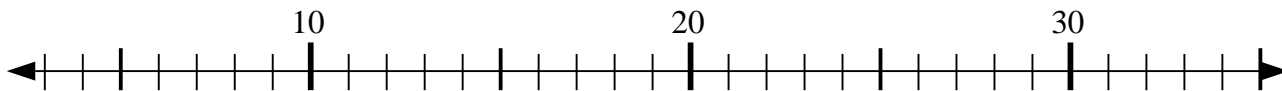
2) $70 - 20 = ?$



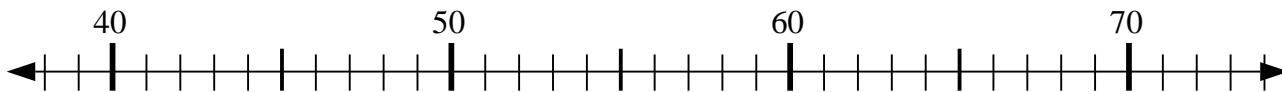
3) $74 + 1 = ?$



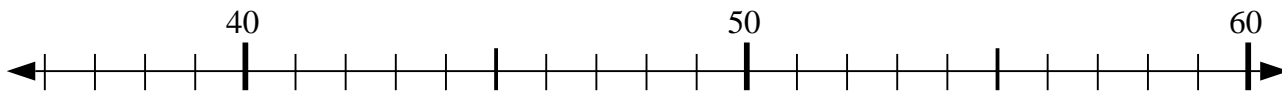
4) $33 + 2 = ?$



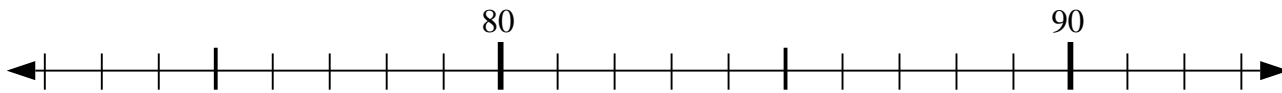
5) $62 - 15 = ?$



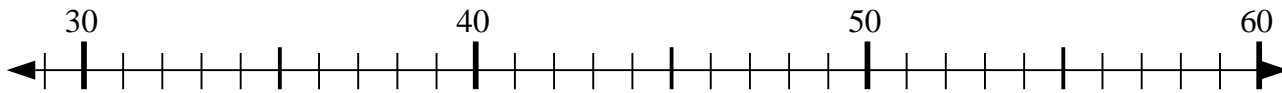
6) $42 + 4 = ?$



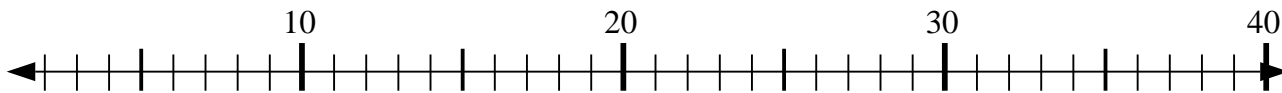
7) $89 - 17 = ?$



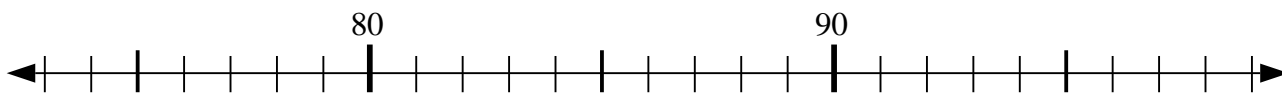
8) $49 - 6 = ?$



9) $7 + 8 = ?$



10) $77 + 10 = ?$



Risposte

1. _____

2. _____

3. _____

4. _____

5. _____

6. _____

7. _____

8. _____

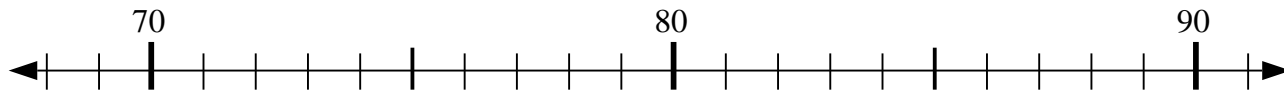
9. _____

10. _____

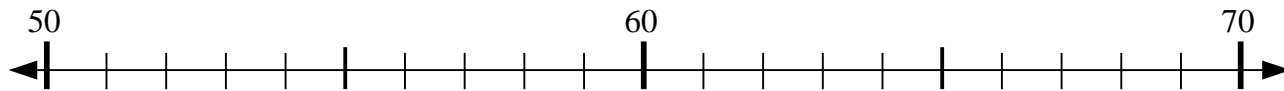


Usa la linea numerata per risolvere il problema.

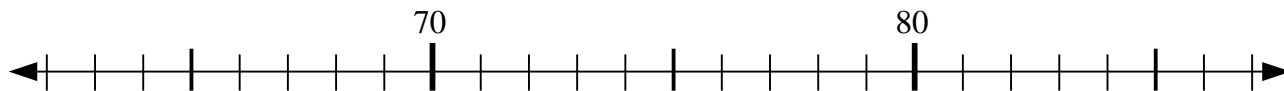
1) $88 - 15 = ?$



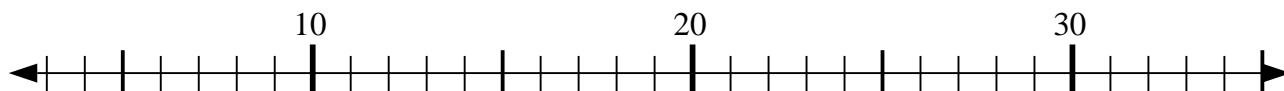
2) $70 - 20 = ?$



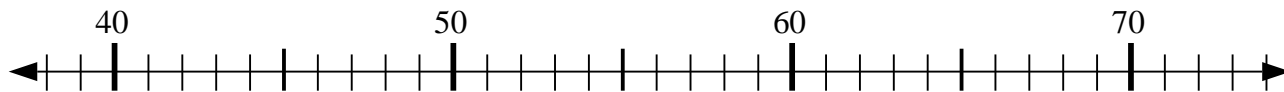
3) $74 + 1 = ?$



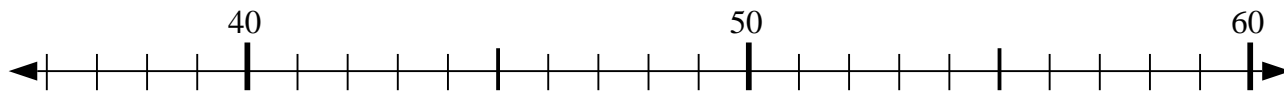
4) $33 + 2 = ?$



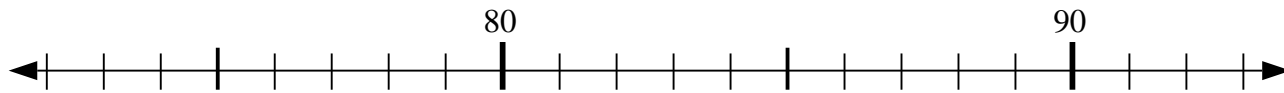
5) $62 - 15 = ?$



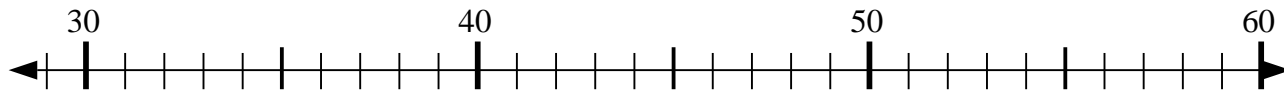
6) $42 + 4 = ?$



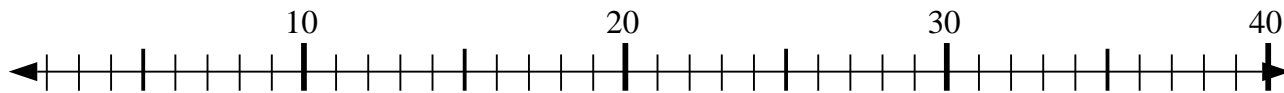
7) $89 - 17 = ?$



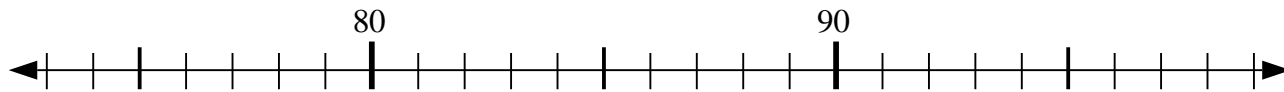
8) $49 - 6 = ?$



9) $7 + 8 = ?$



10) $77 + 10 = ?$



Risposte

1. 73

2. 50

3. 75

4. 35

5. 47

6. 46

7. 72

8. 43

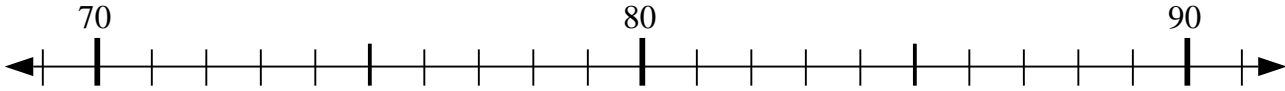
9. 15

10. 87

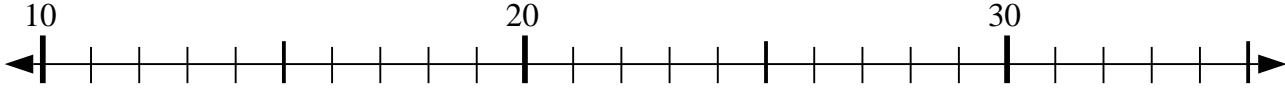


Usa la linea numerata per risolvere il problema.

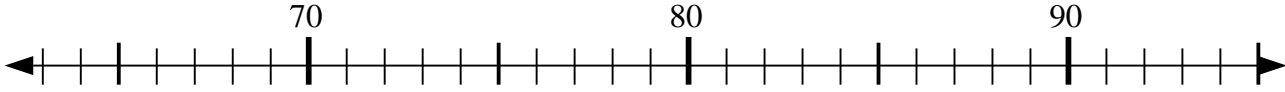
1) $86 + 2 = ?$



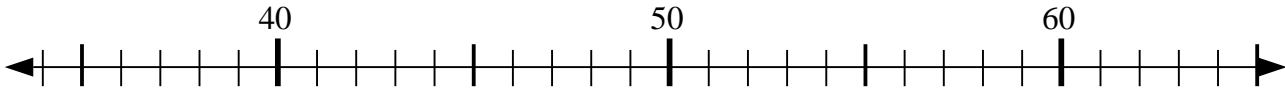
2) $28 - 1 = ?$



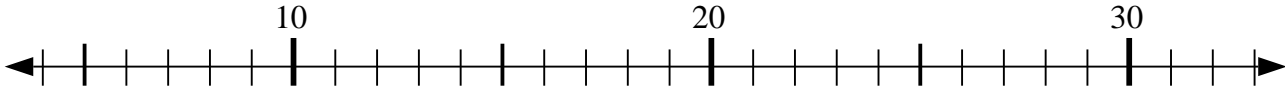
3) $69 + 21 = ?$



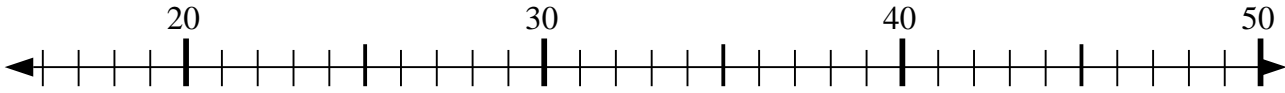
4) $50 - 7 = ?$



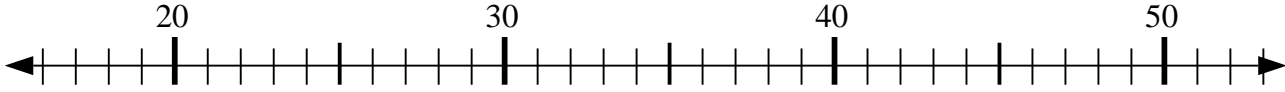
5) $30 - 3 = ?$



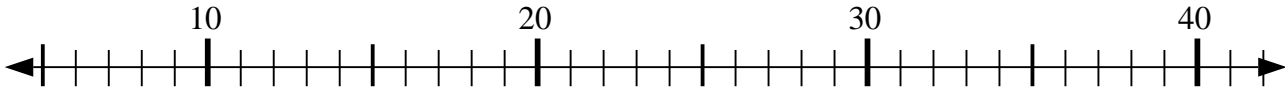
6) $42 - 9 = ?$



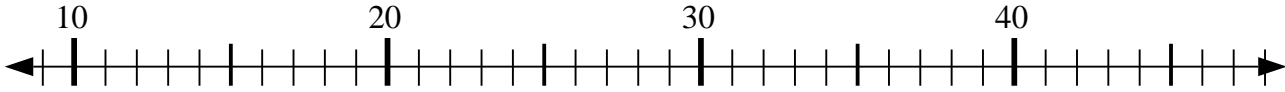
7) $30 - 14 = ?$



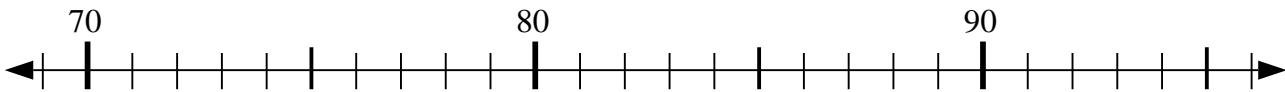
8) $23 - 12 = ?$



9) $11 + 5 = ?$



10) $75 + 5 = ?$



Risposte

1. _____

2. _____

3. _____

4. _____

5. _____

6. _____

7. _____

8. _____

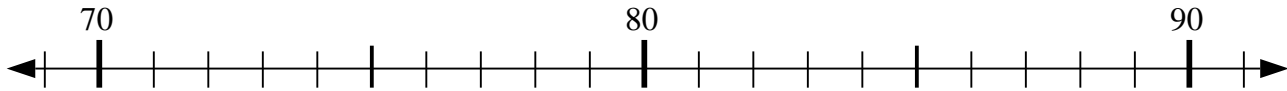
9. _____

10. _____

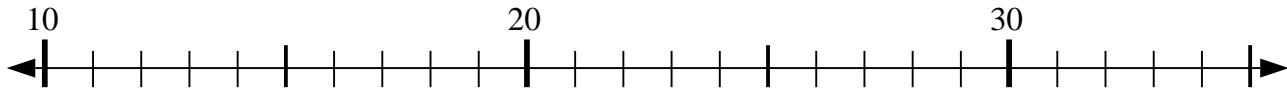


Usa la linea numerata per risolvere il problema.

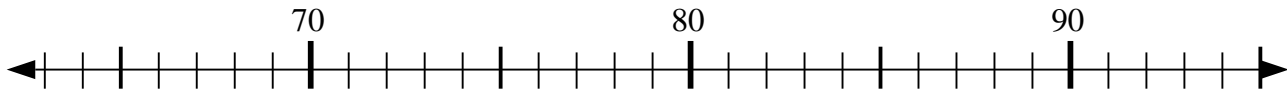
1) $86 + 2 = ?$



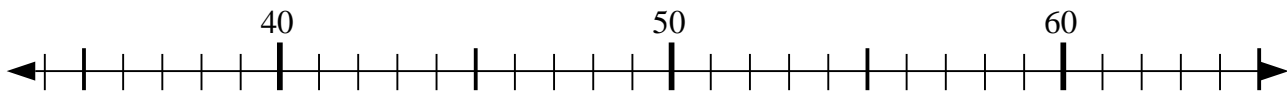
2) $28 - 1 = ?$



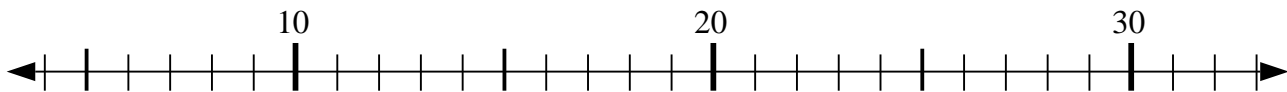
3) $69 + 21 = ?$



4) $50 - 7 = ?$



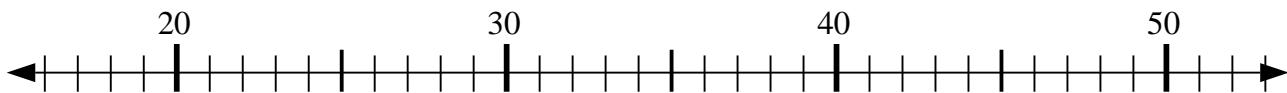
5) $30 - 3 = ?$



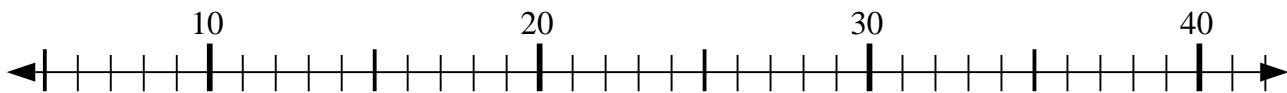
6) $42 - 9 = ?$



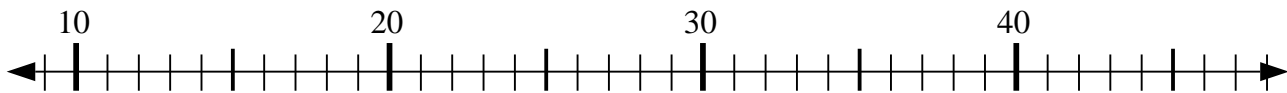
7) $30 - 14 = ?$



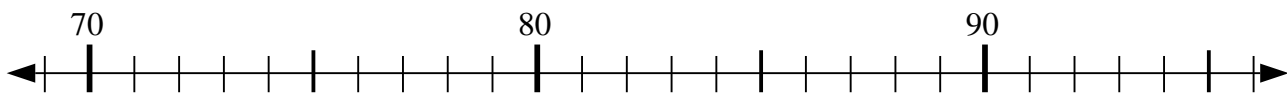
8) $23 - 12 = ?$



9) $11 + 5 = ?$



10) $75 + 5 = ?$



Risposte

1. 88

2. 27

3. 90

4. 43

5. 27

6. 33

7. 16

8. 11

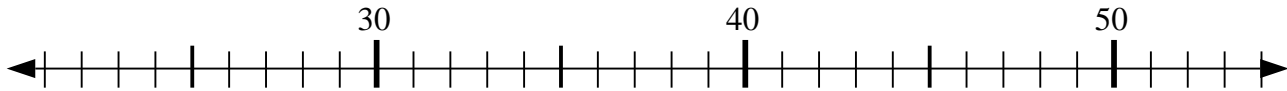
9. 16

10. 80

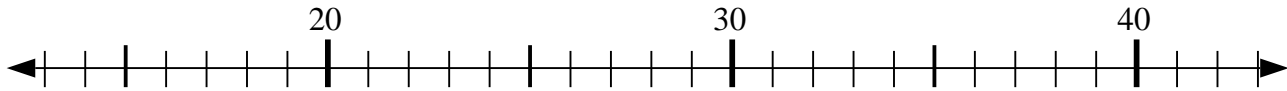


Usa la linea numerata per risolvere il problema.

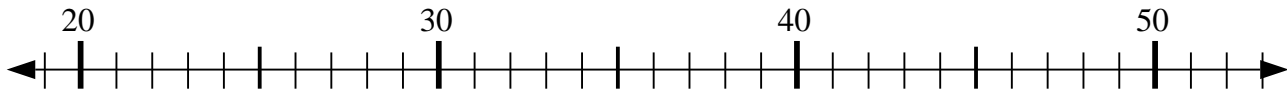
1) $31 + 2 = ?$



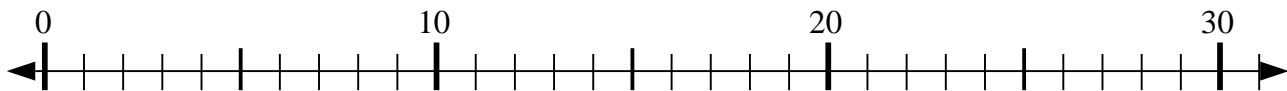
2) $31 - 1 = ?$



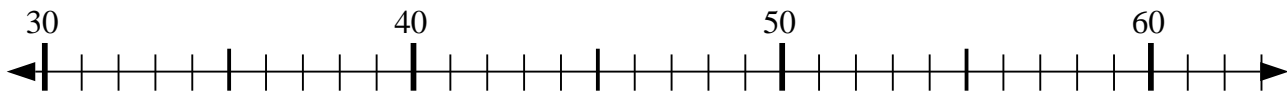
3) $33 + 9 = ?$



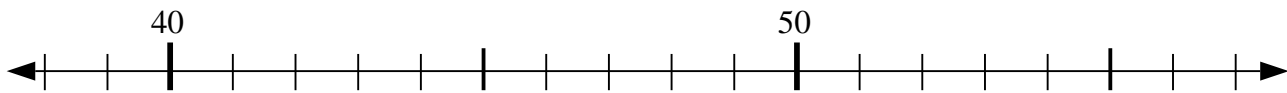
4) $9 + 6 = ?$



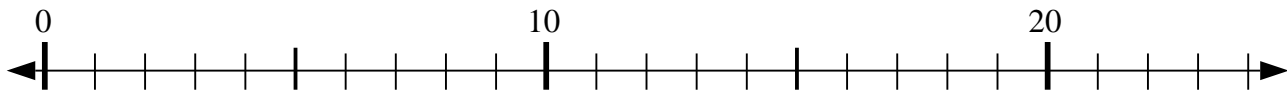
5) $31 + 4 = ?$



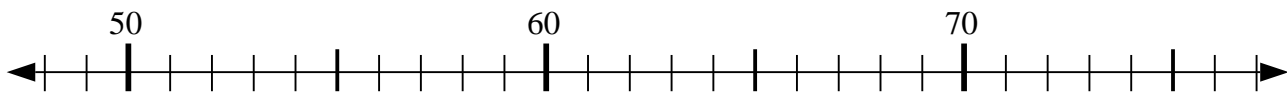
6) $56 - 3 = ?$



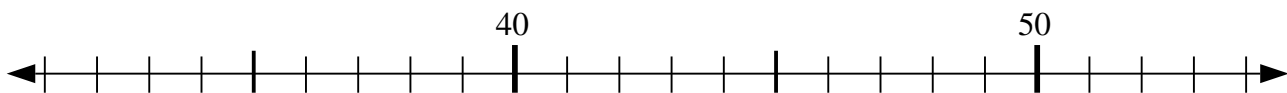
7) $23 - 20 = ?$



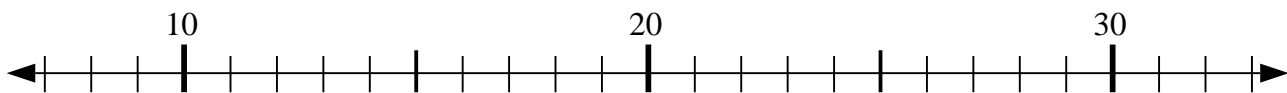
8) $61 + 6 = ?$



9) $46 - 0 = ?$



10) $12 + 8 = ?$



Risposte

1. _____

2. _____

3. _____

4. _____

5. _____

6. _____

7. _____

8. _____

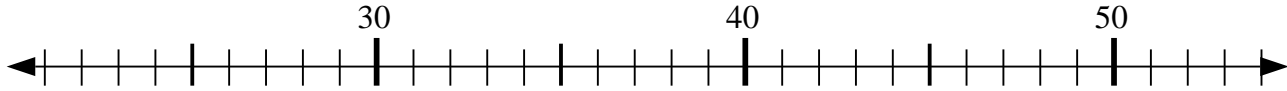
9. _____

10. _____

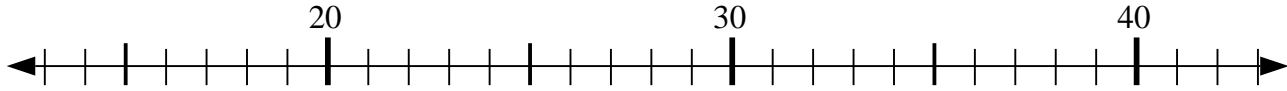


Usa la linea numerata per risolvere il problema.

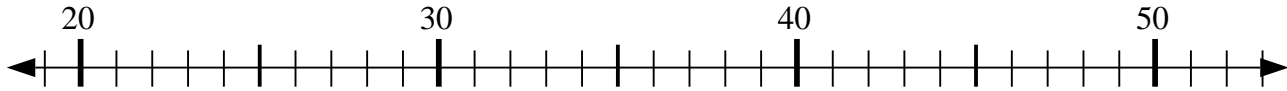
1) $31 + 2 = ?$



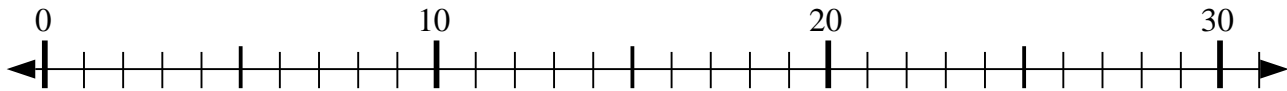
2) $31 - 1 = ?$



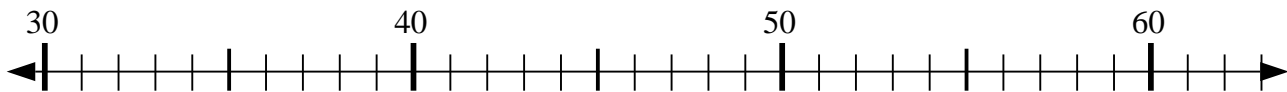
3) $33 + 9 = ?$



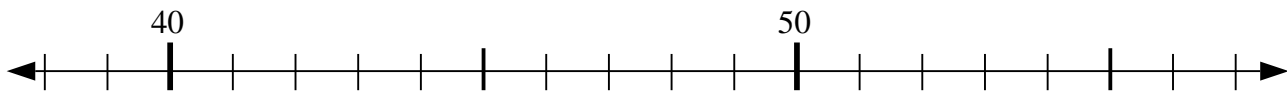
4) $9 + 6 = ?$



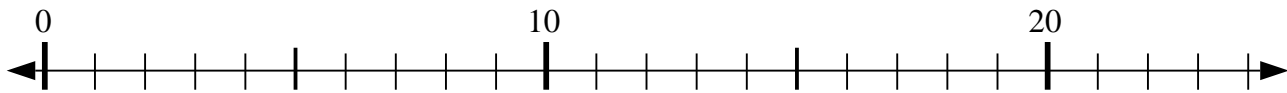
5) $31 + 4 = ?$



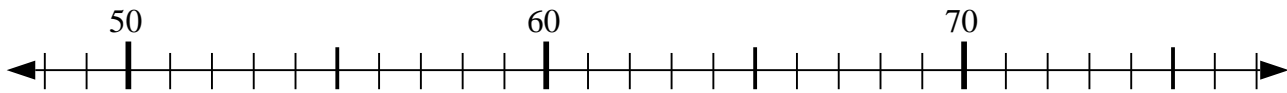
6) $56 - 3 = ?$



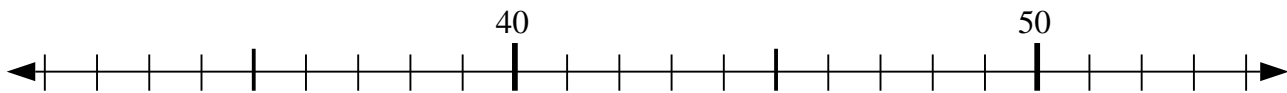
7) $23 - 20 = ?$



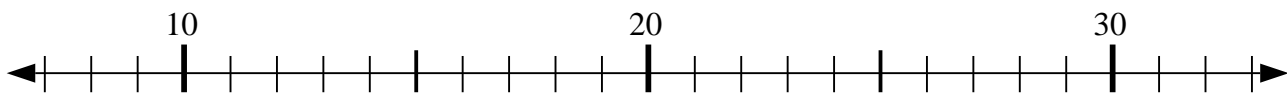
8) $61 + 6 = ?$



9) $46 - 0 = ?$



10) $12 + 8 = ?$



Risposte

1. 33

2. 30

3. 42

4. 15

5. 35

6. 53

7. 3

8. 67

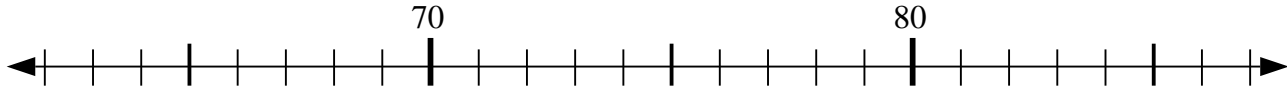
9. 46

10. 20

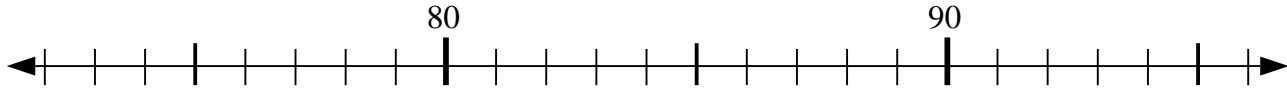


Usa la linea numerata per risolvere il problema.

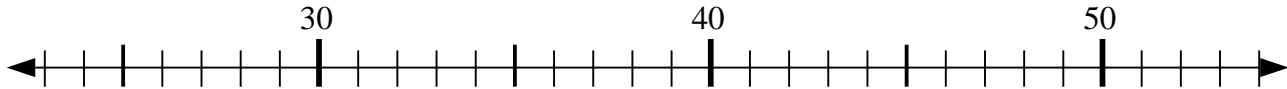
1) $68 - 0 = ?$



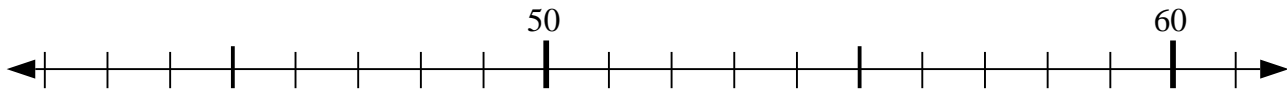
2) $76 + 4 = ?$



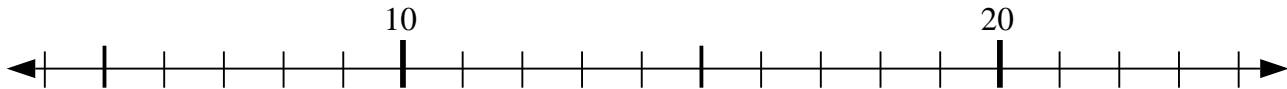
3) $48 - 9 = ?$



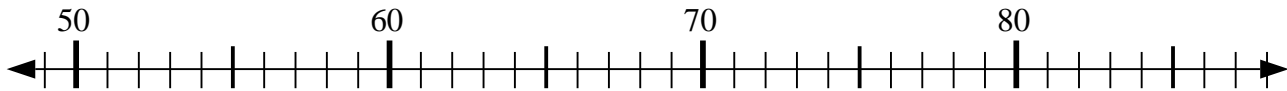
4) $57 - 6 = ?$



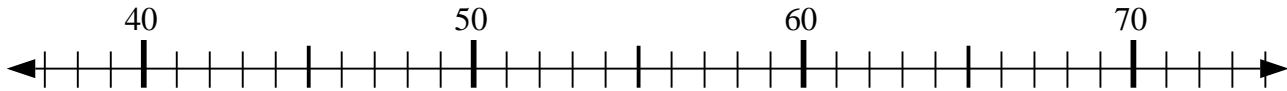
5) $14 + 0 = ?$



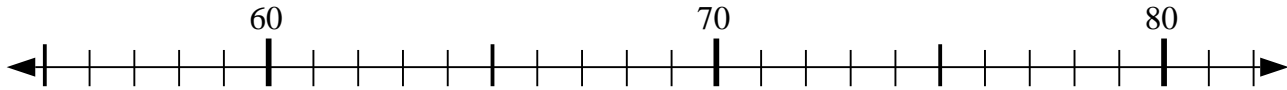
6) $76 + 6 = ?$



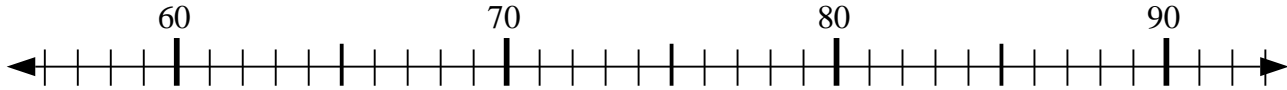
7) $53 + 20 = ?$



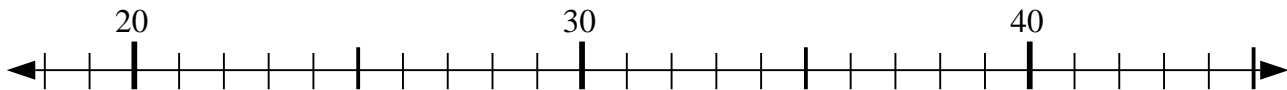
8) $57 + 7 = ?$



9) $61 - 0 = ?$



10) $28 - 4 = ?$



Risposte

1. _____

2. _____

3. _____

4. _____

5. _____

6. _____

7. _____

8. _____

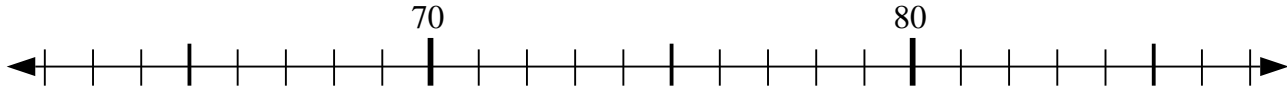
9. _____

10. _____

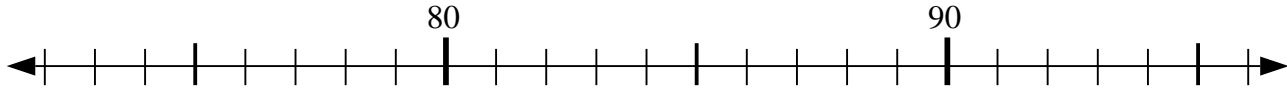


Usa la linea numerata per risolvere il problema.

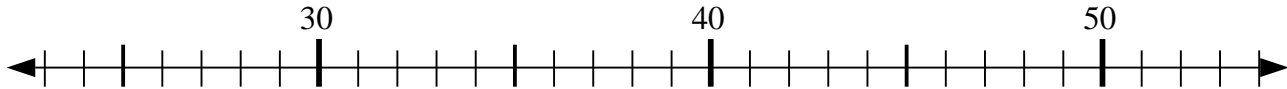
1) $68 - 0 = ?$



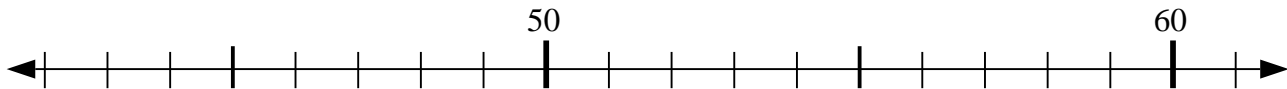
2) $76 + 4 = ?$



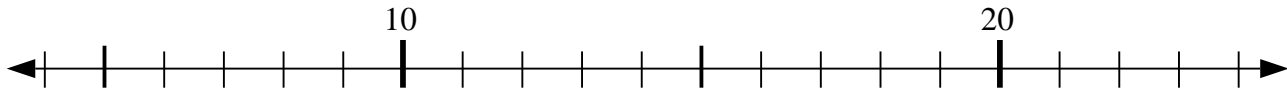
3) $48 - 9 = ?$



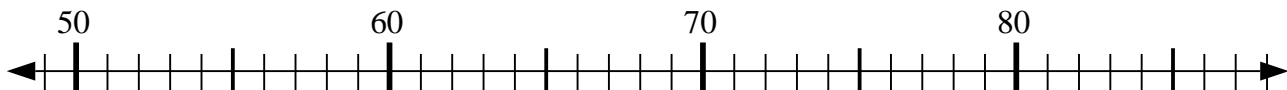
4) $57 - 6 = ?$



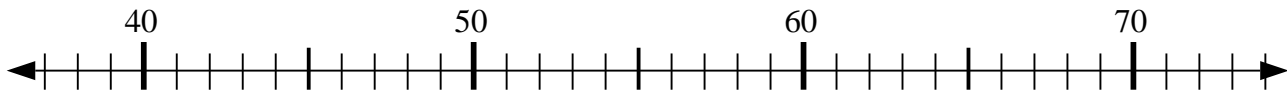
5) $14 + 0 = ?$



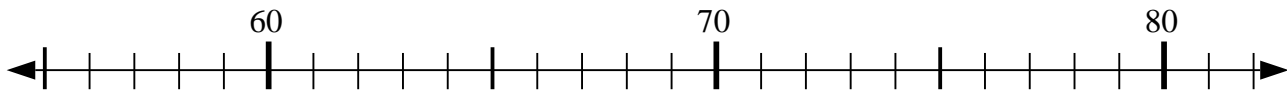
6) $76 + 6 = ?$



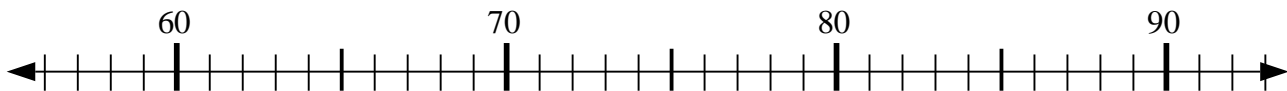
7) $53 + 20 = ?$



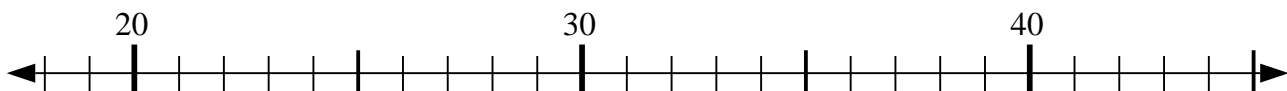
8) $57 + 7 = ?$



9) $61 - 0 = ?$



10) $28 - 4 = ?$



Risposte

1. 68

2. 80

3. 39

4. 51

5. 14

6. 82

7. 73

8. 64

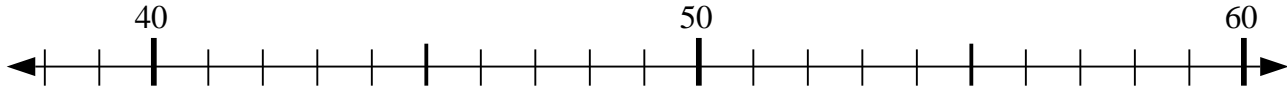
9. 61

10. 24

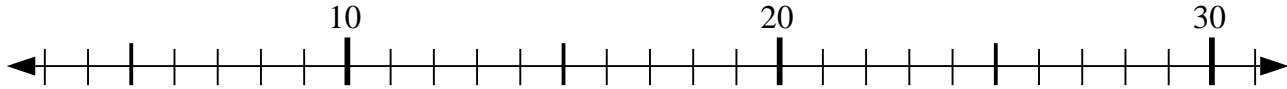


Usa la linea numerata per risolvere il problema.

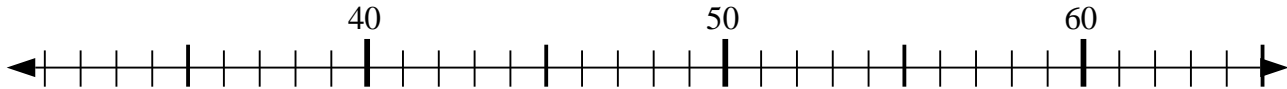
1) $45 - 5 = ?$



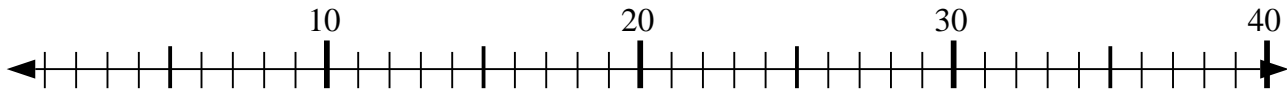
2) $31 - 27 = ?$



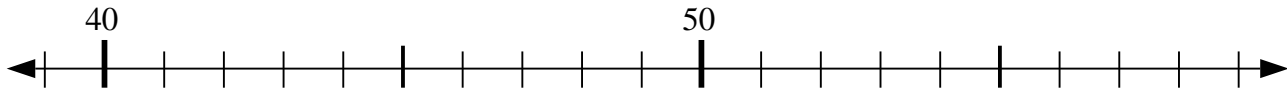
3) $55 + 4 = ?$



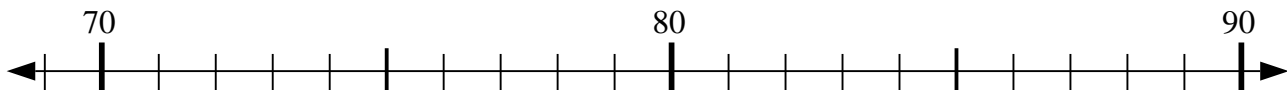
4) $14 + 17 = ?$



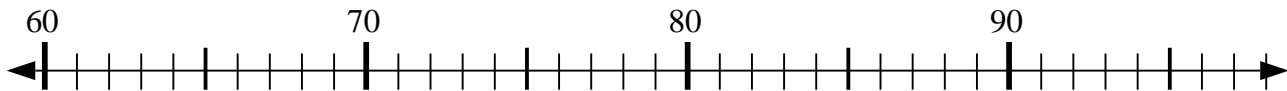
5) $41 + 4 = ?$



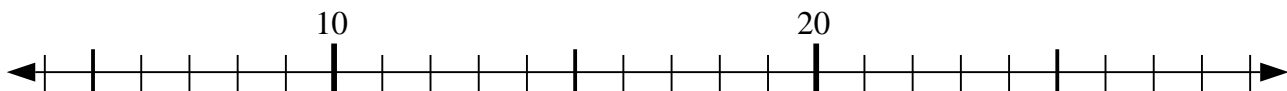
6) $77 - 3 = ?$



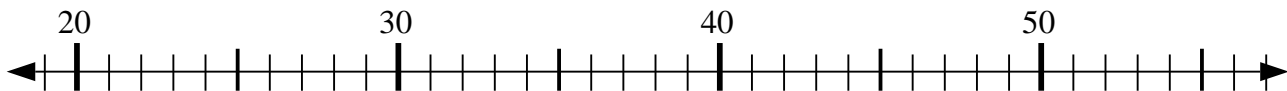
7) $65 + 7 = ?$



8) $19 - 4 = ?$



9) $20 + 6 = ?$



10) $22 + 5 = ?$



Risposte

1. _____

2. _____

3. _____

4. _____

5. _____

6. _____

7. _____

8. _____

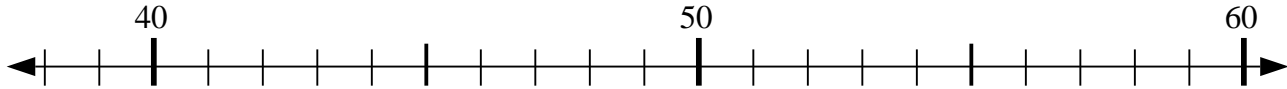
9. _____

10. _____

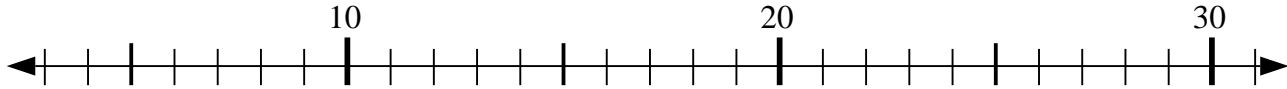


Usa la linea numerata per risolvere il problema.

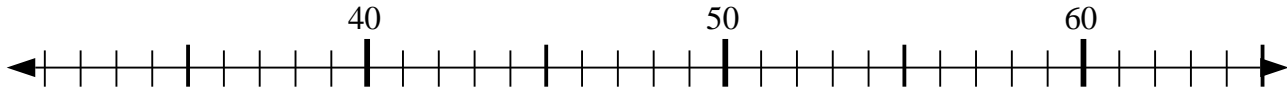
1) $45 - 5 = ?$



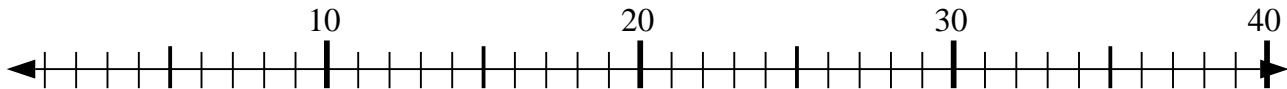
2) $31 - 27 = ?$



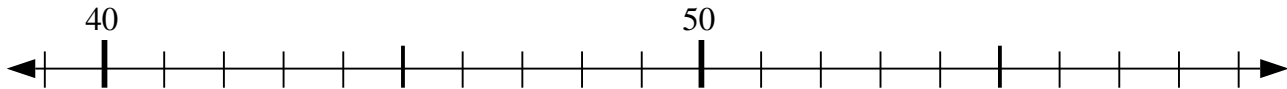
3) $55 + 4 = ?$



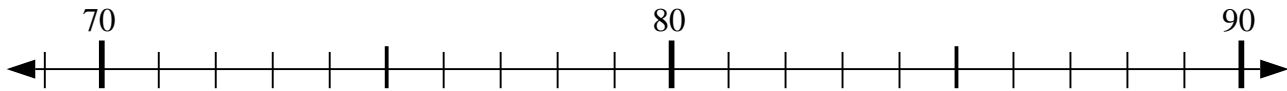
4) $14 + 17 = ?$



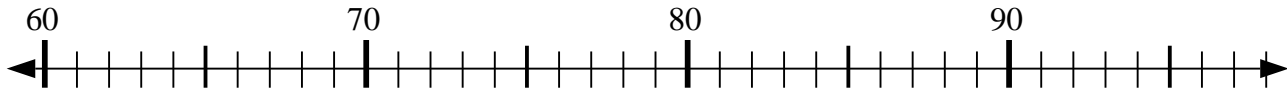
5) $41 + 4 = ?$



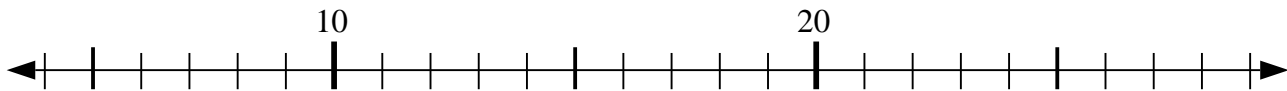
6) $77 - 3 = ?$



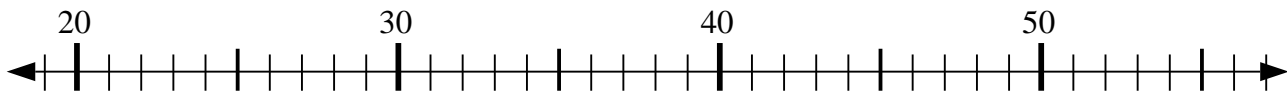
7) $65 + 7 = ?$



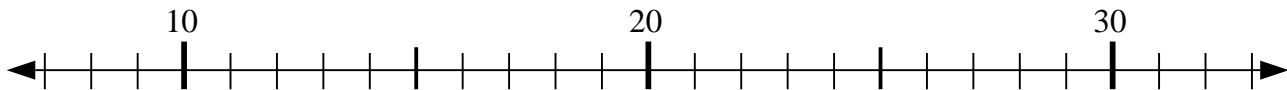
8) $19 - 4 = ?$



9) $20 + 6 = ?$



10) $22 + 5 = ?$



Risposte

1. 40

2. 4

3. 59

4. 31

5. 45

6. 74

7. 72

8. 15

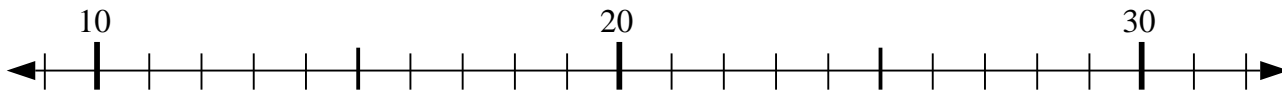
9. 26

10. 27

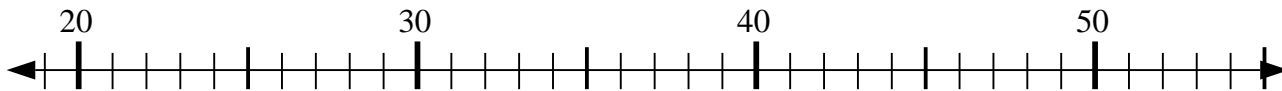


Usa la linea numerata per risolvere il problema.

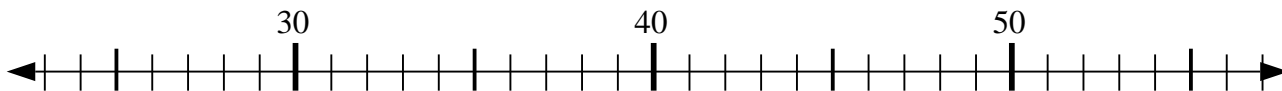
1) $15 + 1 = ?$



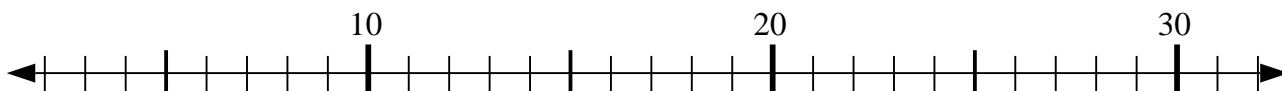
2) $31 - 0 = ?$



3) $56 - 23 = ?$



4) $21 + 4 = ?$



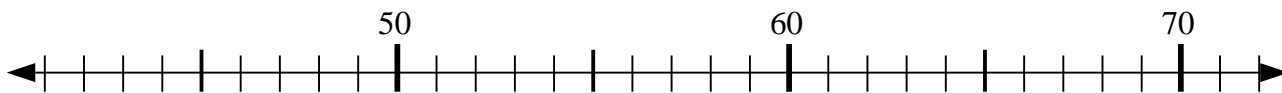
5) $52 - 11 = ?$



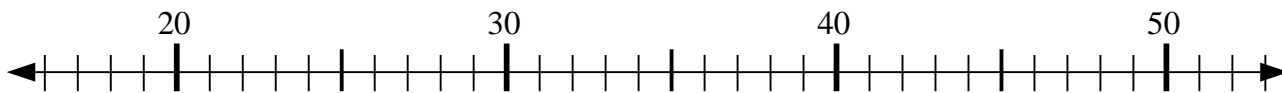
6) $14 + 14 = ?$



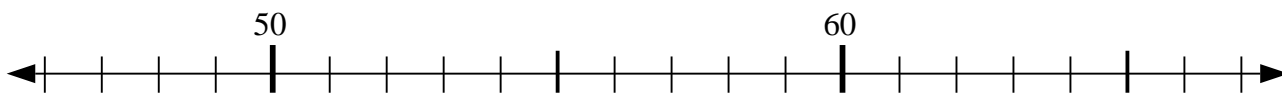
7) $67 + 2 = ?$



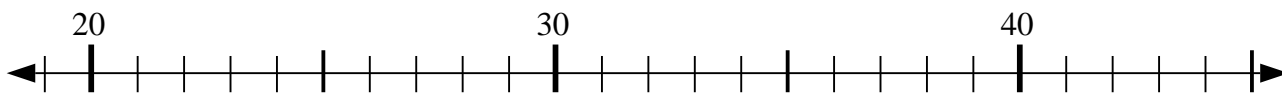
8) $26 + 5 = ?$



9) $52 - 5 = ?$



10) $29 + 5 = ?$



Risposte

1. _____

2. _____

3. _____

4. _____

5. _____

6. _____

7. _____

8. _____

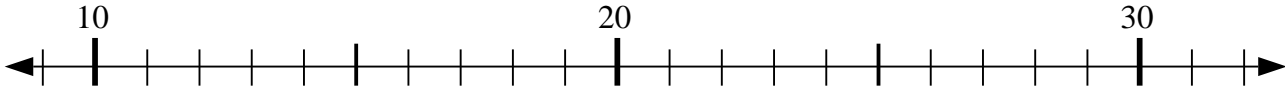
9. _____

10. _____

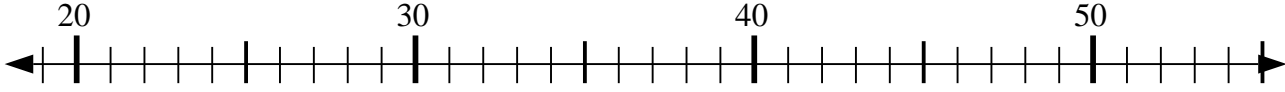


Usa la linea numerata per risolvere il problema.

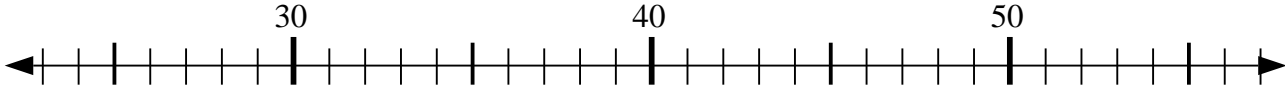
1) $15 + 1 = ?$



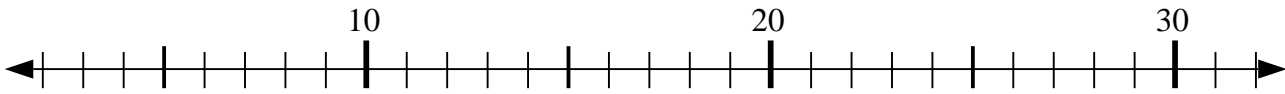
2) $31 - 0 = ?$



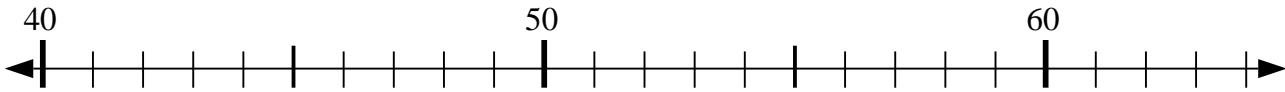
3) $56 - 23 = ?$



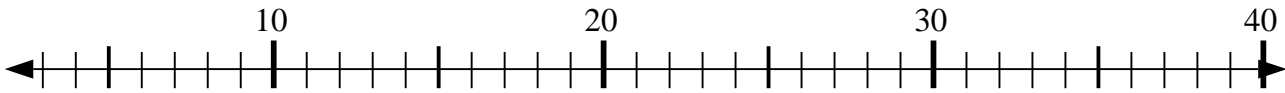
4) $21 + 4 = ?$



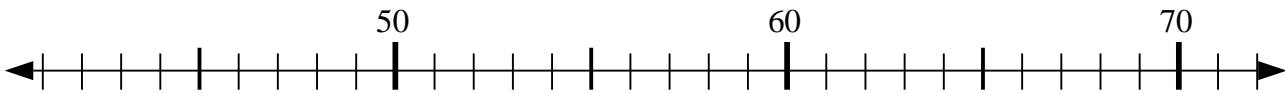
5) $52 - 11 = ?$



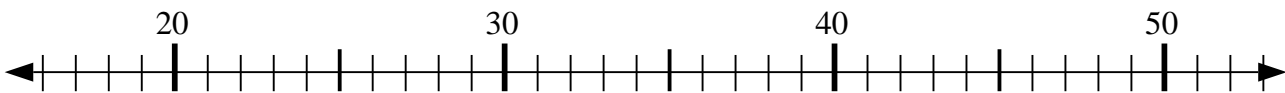
6) $14 + 14 = ?$



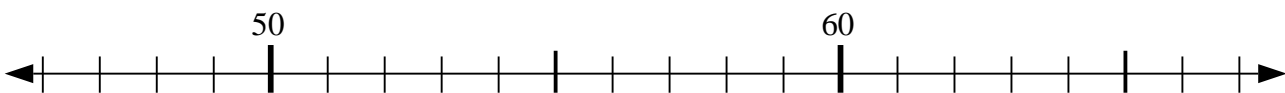
7) $67 + 2 = ?$



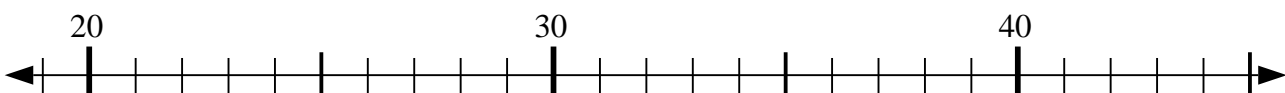
8) $26 + 5 = ?$



9) $52 - 5 = ?$



10) $29 + 5 = ?$



Risposte

1. 16

2. 31

3. 33

4. 25

5. 41

6. 28

7. 69

8. 31

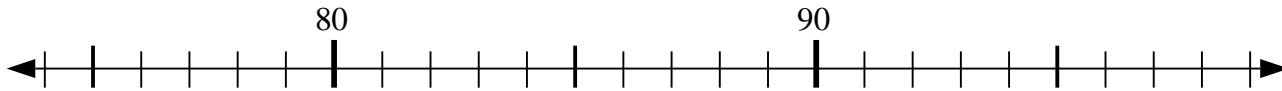
9. 47

10. 34

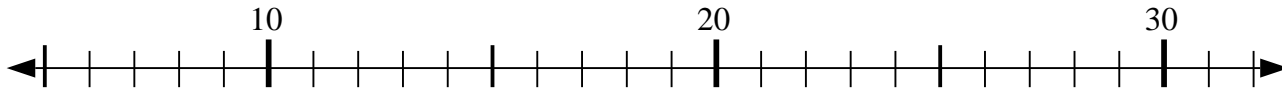


Usa la linea numerata per risolvere il problema.

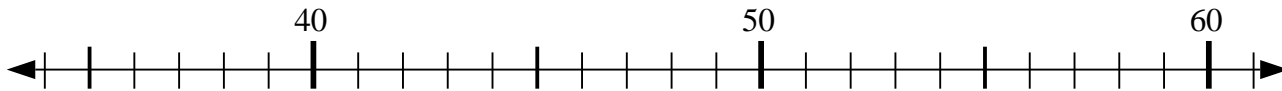
1) $80 - 6 = ?$



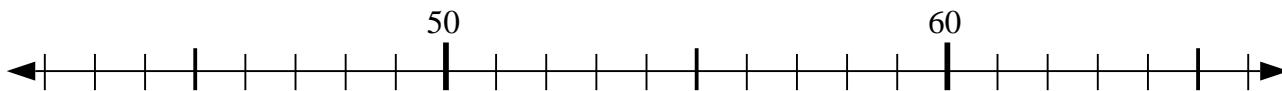
2) $8 + 2 = ?$



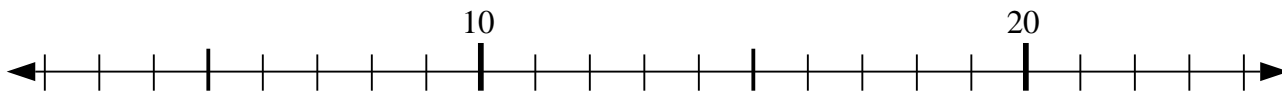
3) $36 + 19 = ?$



4) $54 - 0 = ?$



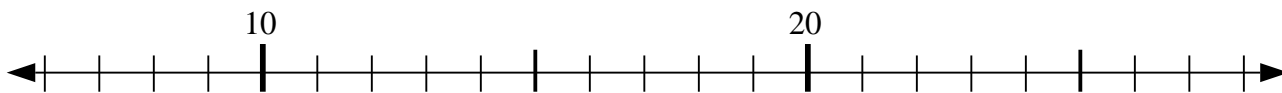
5) $14 - 8 = ?$



6) $37 + 4 = ?$



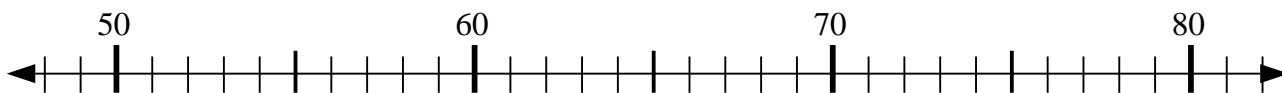
7) $27 - 0 = ?$



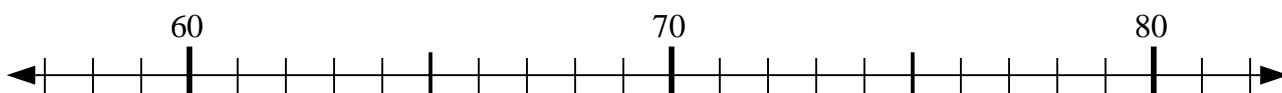
8) $45 - 16 = ?$



9) $61 + 5 = ?$



10) $69 - 8 = ?$



Risposte

1. _____

2. _____

3. _____

4. _____

5. _____

6. _____

7. _____

8. _____

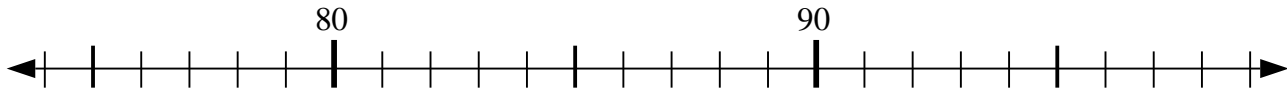
9. _____

10. _____

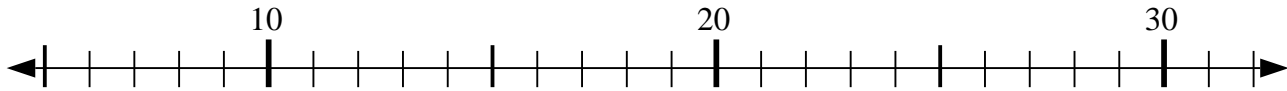


Usa la linea numerata per risolvere il problema.

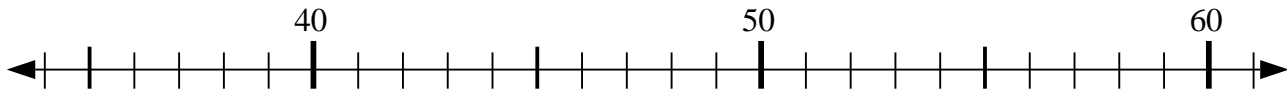
1) $80 - 6 = ?$



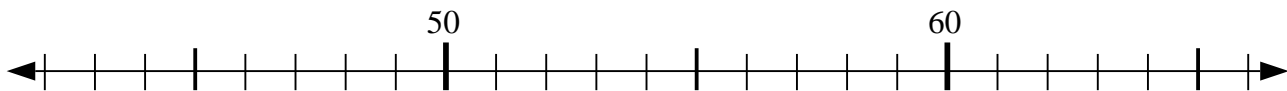
2) $8 + 2 = ?$



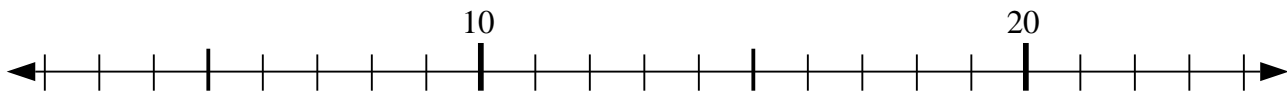
3) $36 + 19 = ?$



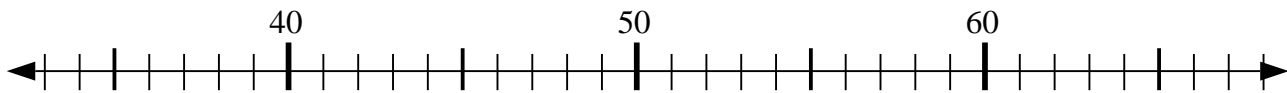
4) $54 - 0 = ?$



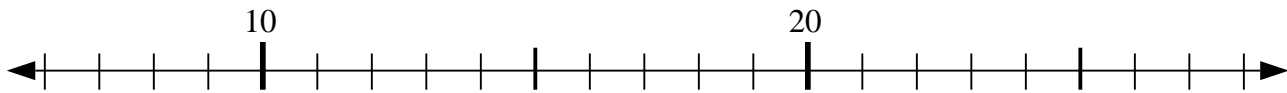
5) $14 - 8 = ?$



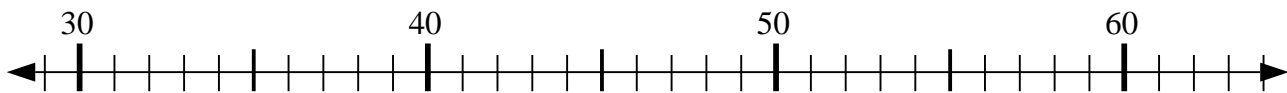
6) $37 + 4 = ?$



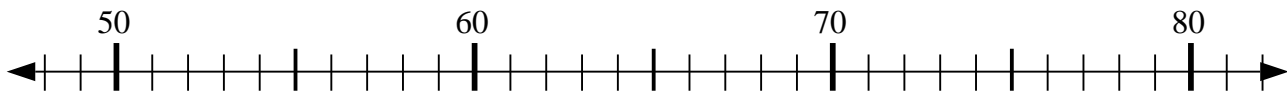
7) $27 - 0 = ?$



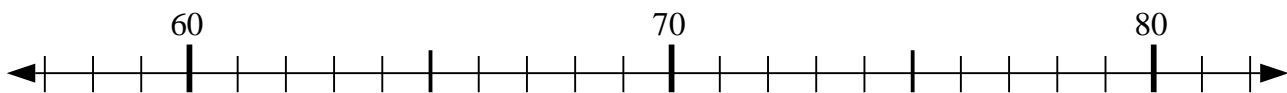
8) $45 - 16 = ?$



9) $61 + 5 = ?$



10) $69 - 8 = ?$



Risposte

1. 74

2. 10

3. 55

4. 54

5. 6

6. 41

7. 27

8. 29

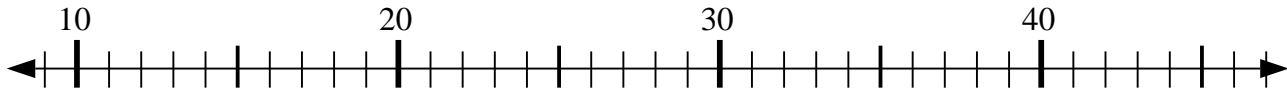
9. 66

10. 61

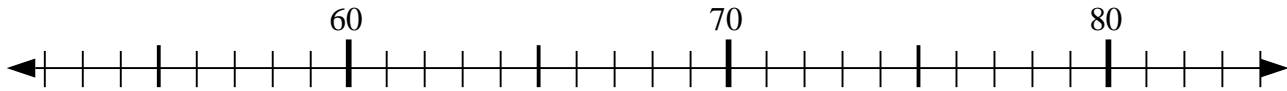


Usa la linea numerata per risolvere il problema.

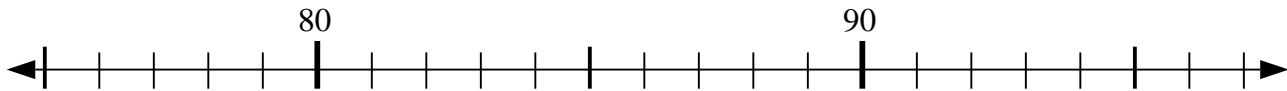
1) $14 - 4 = ?$



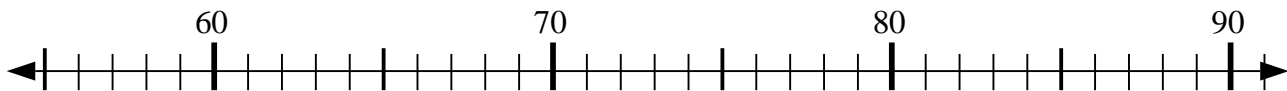
2) $60 - 6 = ?$



3) $84 - 7 = ?$



4) $77 - 19 = ?$



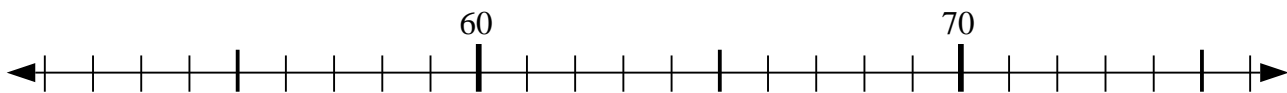
5) $56 + 6 = ?$



6) $54 + 27 = ?$



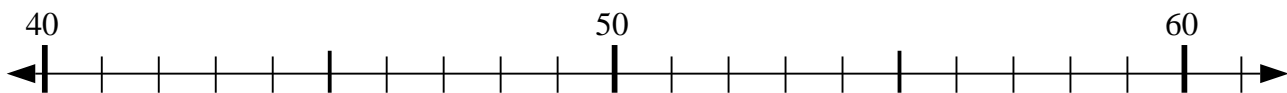
7) $55 + 11 = ?$



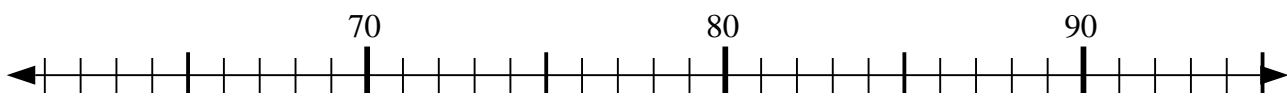
8) $31 - 9 = ?$



9) $57 + 2 = ?$



10) $69 + 1 = ?$



Risposte

1. _____

2. _____

3. _____

4. _____

5. _____

6. _____

7. _____

8. _____

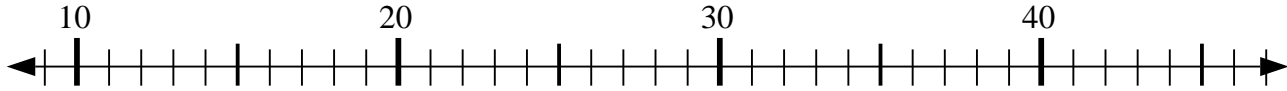
9. _____

10. _____

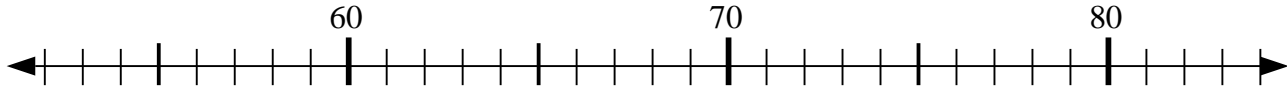


Usa la linea numerata per risolvere il problema.

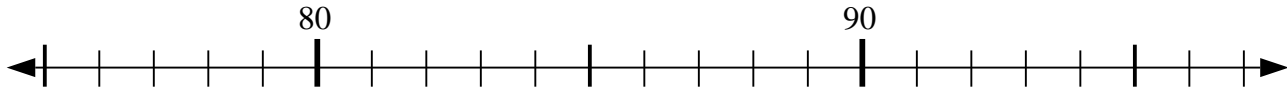
1) $14 - 4 = ?$



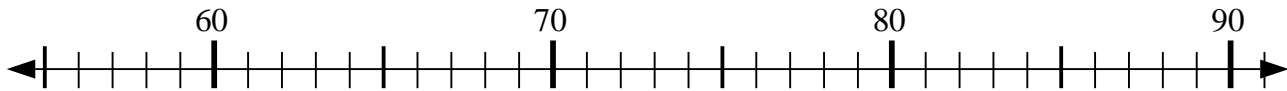
2) $60 - 6 = ?$



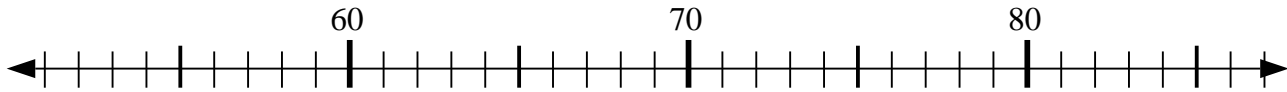
3) $84 - 7 = ?$



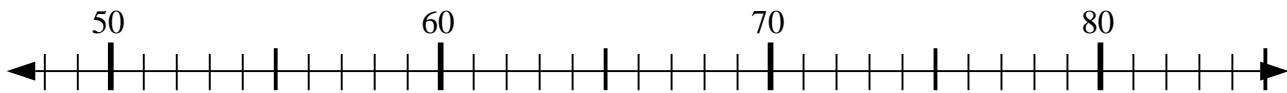
4) $77 - 19 = ?$



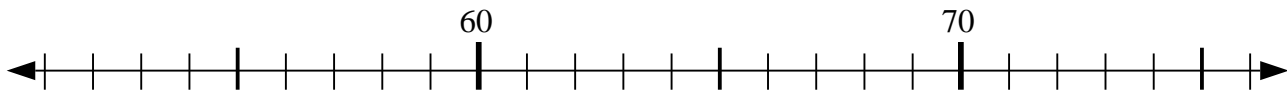
5) $56 + 6 = ?$



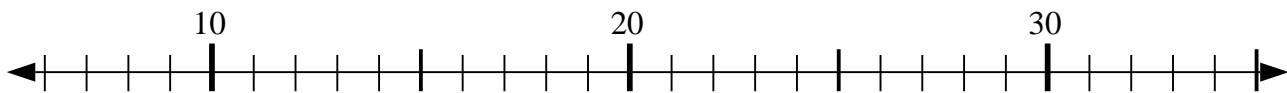
6) $54 + 27 = ?$



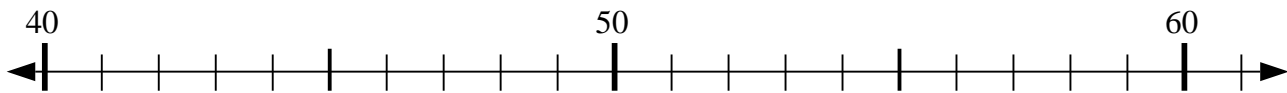
7) $55 + 11 = ?$



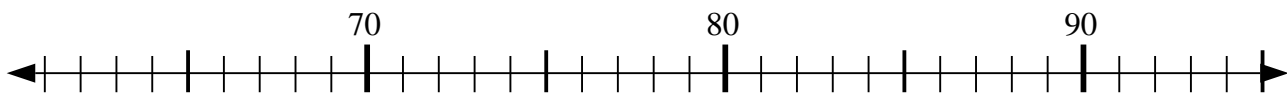
8) $31 - 9 = ?$



9) $57 + 2 = ?$



10) $69 + 1 = ?$



Risposte

1. 10

2. 54

3. 77

4. 58

5. 62

6. 81

7. 66

8. 22

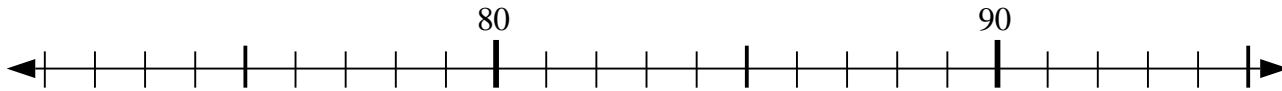
9. 59

10. 70

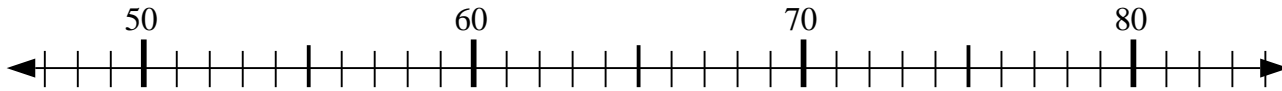


Usa la linea numerata per risolvere il problema.

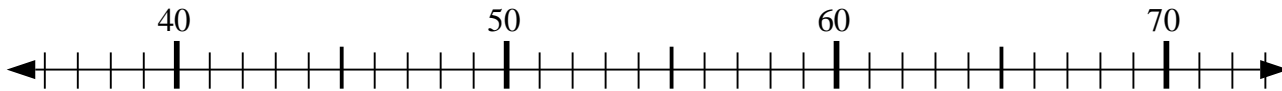
1) $79 + 14 = ?$



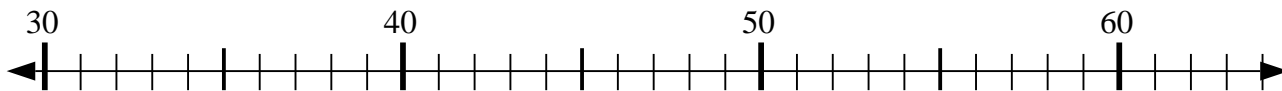
2) $53 - 0 = ?$



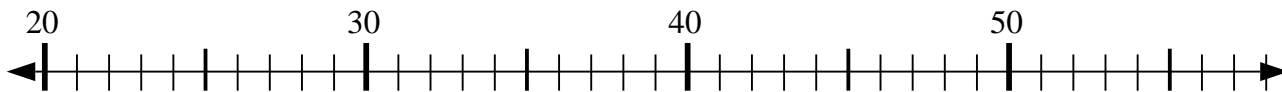
3) $42 + 1 = ?$



4) $41 - 2 = ?$



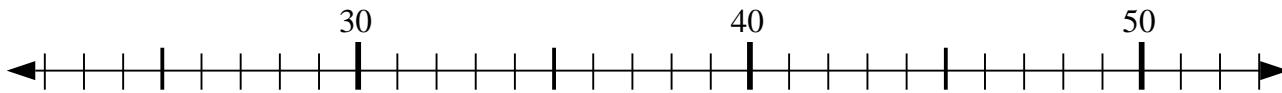
5) $32 - 9 = ?$



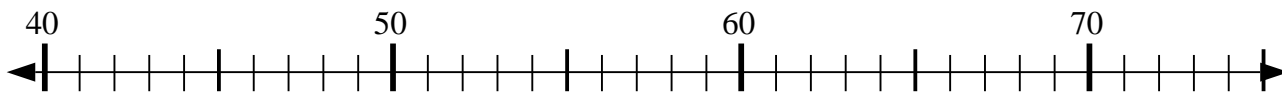
6) $40 - 3 = ?$



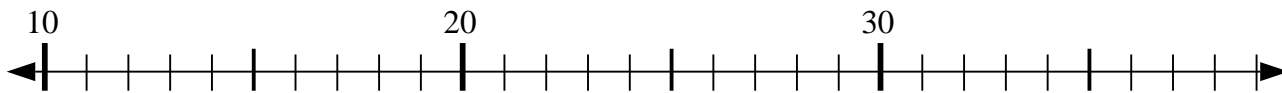
7) $30 + 11 = ?$



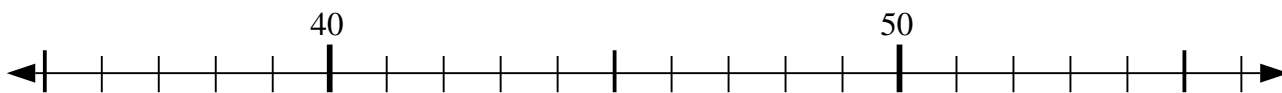
8) $49 + 3 = ?$



9) $22 - 9 = ?$



10) $42 - 4 = ?$



Risposte

1. _____

2. _____

3. _____

4. _____

5. _____

6. _____

7. _____

8. _____

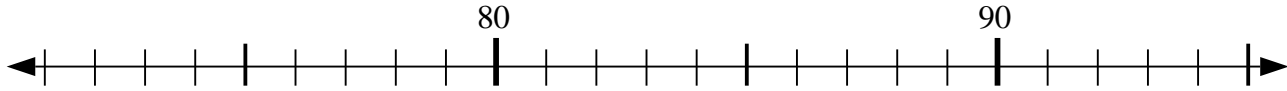
9. _____

10. _____

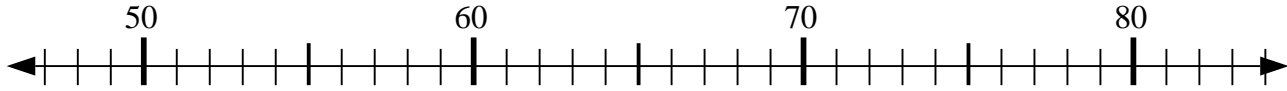


Usa la linea numerata per risolvere il problema.

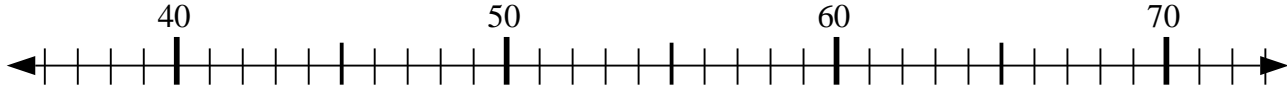
1) $79 + 14 = ?$



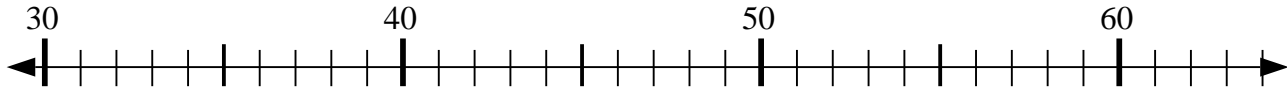
2) $53 - 0 = ?$



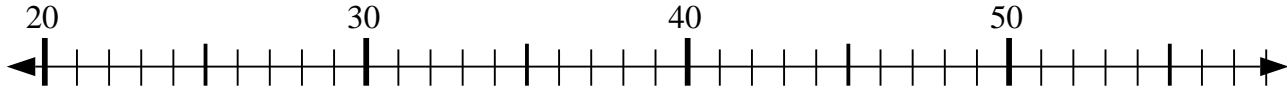
3) $42 + 1 = ?$



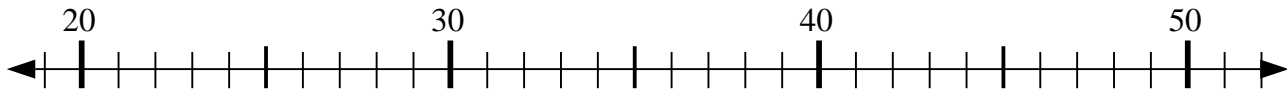
4) $41 - 2 = ?$



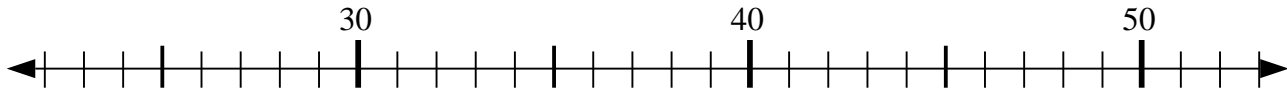
5) $32 - 9 = ?$



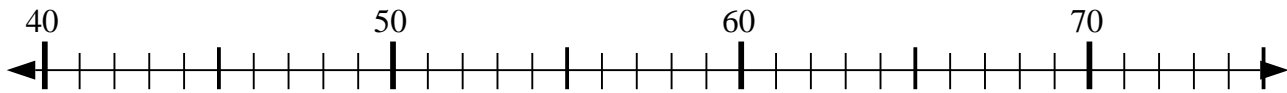
6) $40 - 3 = ?$



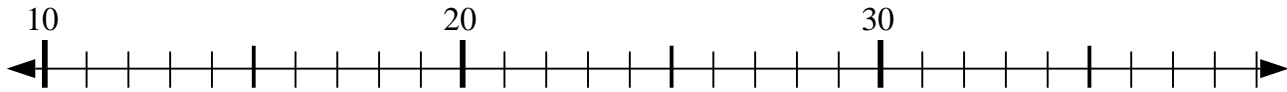
7) $30 + 11 = ?$



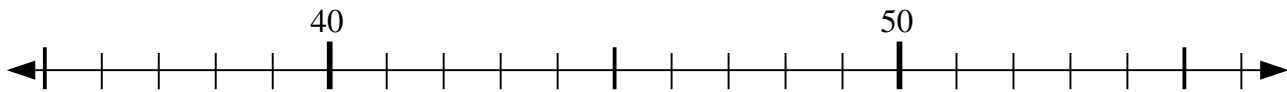
8) $49 + 3 = ?$



9) $22 - 9 = ?$



10) $42 - 4 = ?$



Risposte

1. 93

2. 53

3. 43

4. 39

5. 23

6. 37

7. 41

8. 52

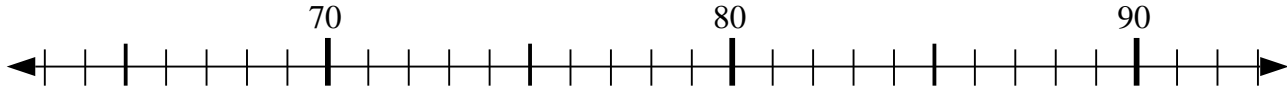
9. 13

10. 38

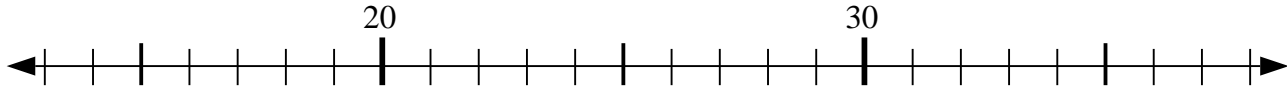


Usa la linea numerata per risolvere il problema.

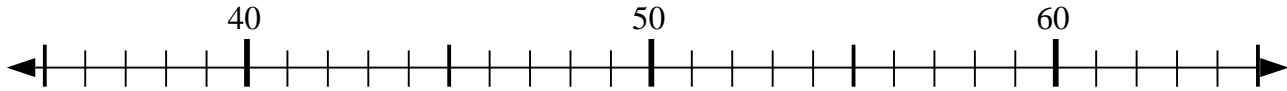
1) $85 - 2 = ?$



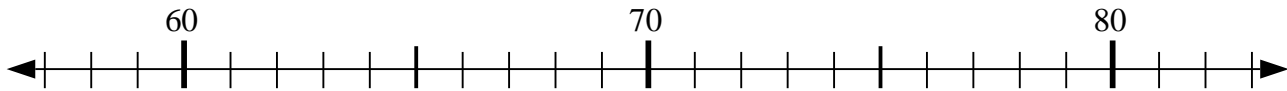
2) $38 - 16 = ?$



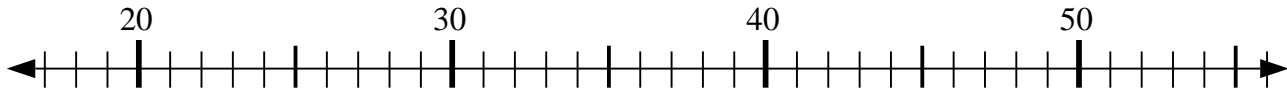
3) $41 - 3 = ?$



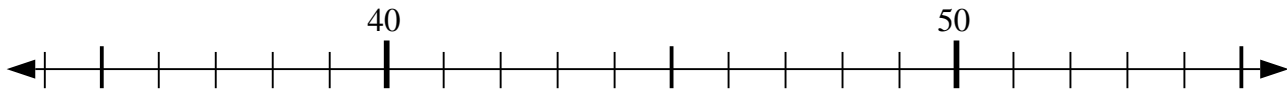
4) $82 - 20 = ?$



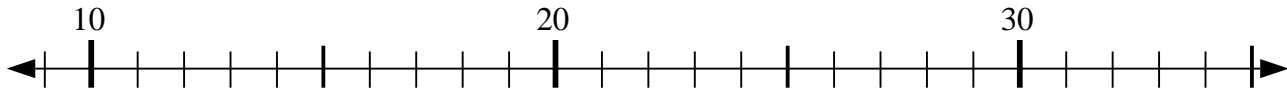
5) $37 - 3 = ?$



6) $49 - 14 = ?$



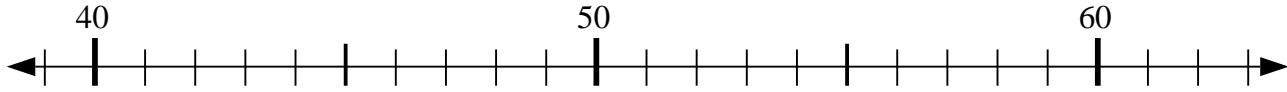
7) $9 + 15 = ?$



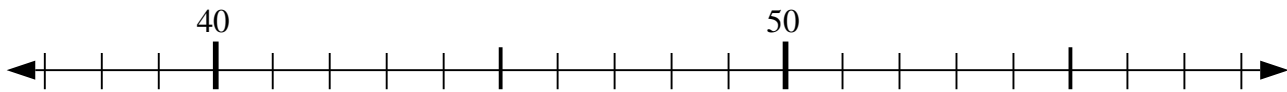
8) $43 - 15 = ?$



9) $49 + 6 = ?$



10) $43 + 3 = ?$



Risposte

1. _____

2. _____

3. _____

4. _____

5. _____

6. _____

7. _____

8. _____

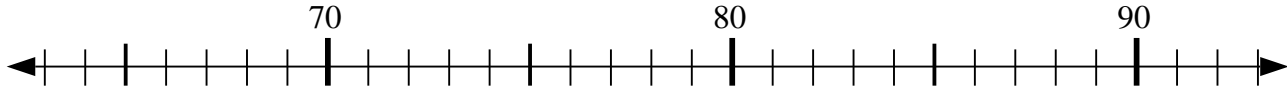
9. _____

10. _____

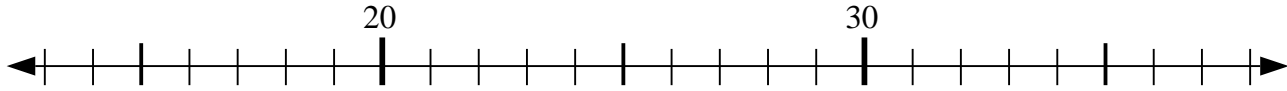


Usa la linea numerata per risolvere il problema.

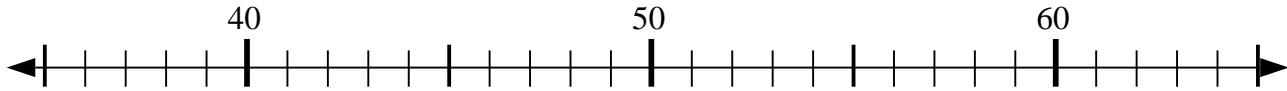
1) $85 - 2 = ?$



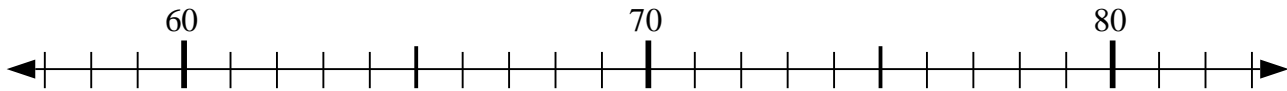
2) $38 - 16 = ?$



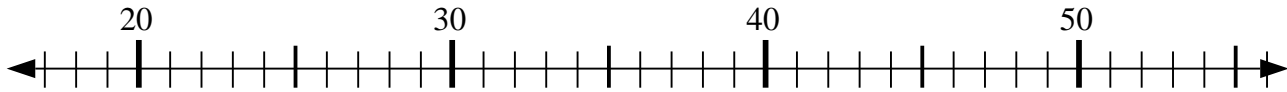
3) $41 - 3 = ?$



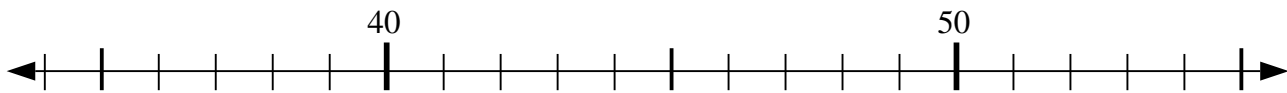
4) $82 - 20 = ?$



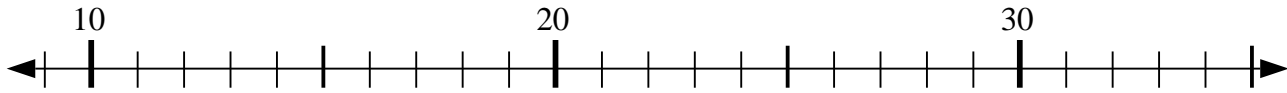
5) $37 - 3 = ?$



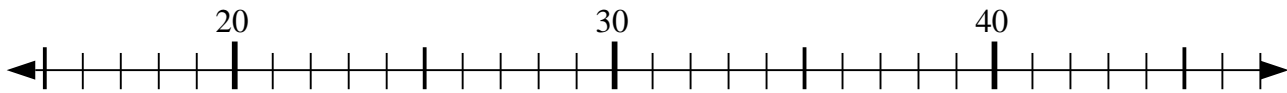
6) $49 - 14 = ?$



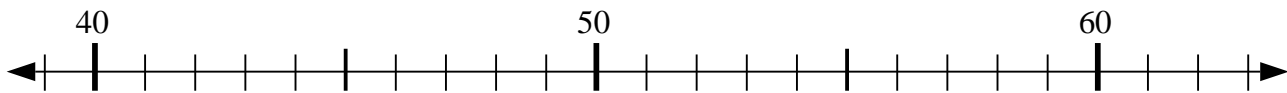
7) $9 + 15 = ?$



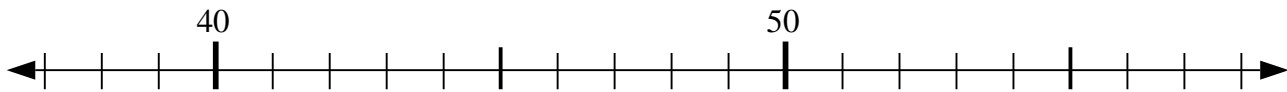
8) $43 - 15 = ?$



9) $49 + 6 = ?$



10) $43 + 3 = ?$



Risposte

1. 83

2. 22

3. 38

4. 62

5. 34

6. 35

7. 24

8. 28

9. 55

10. 46