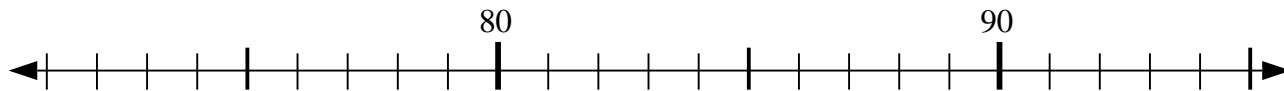


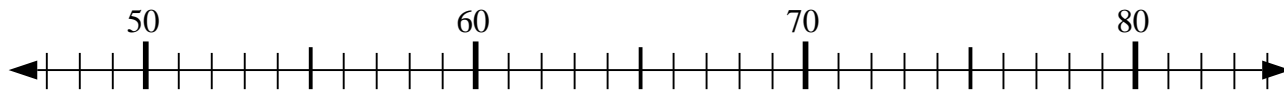


Usa la linea numerata per risolvere il problema.

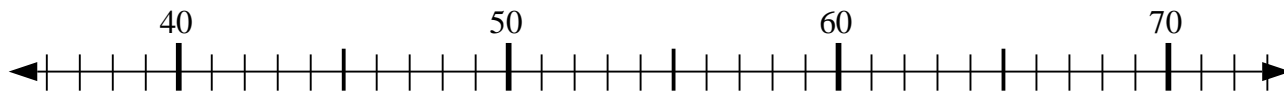
1) $79 + 14 = ?$



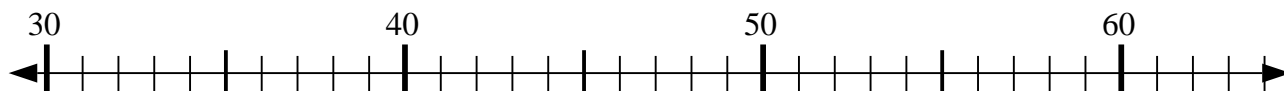
2) $53 - 0 = ?$



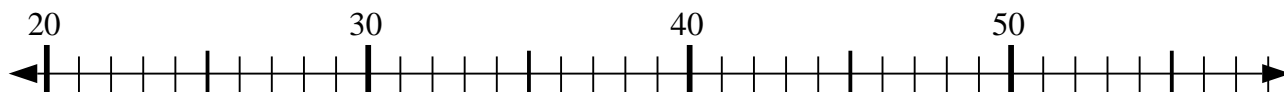
3) $42 + 1 = ?$



4) $41 - 2 = ?$



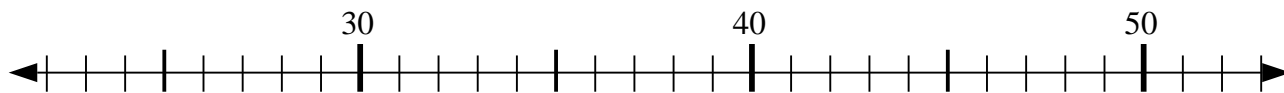
5) $32 - 9 = ?$



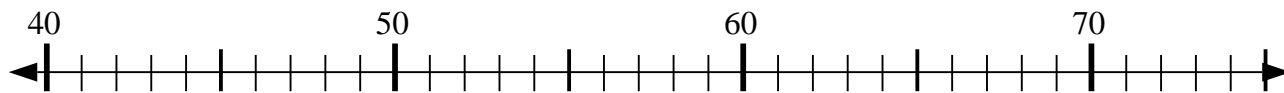
6) $40 - 3 = ?$



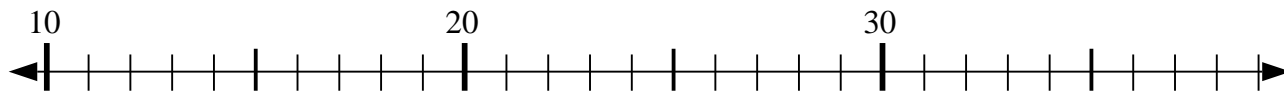
7) $30 + 11 = ?$



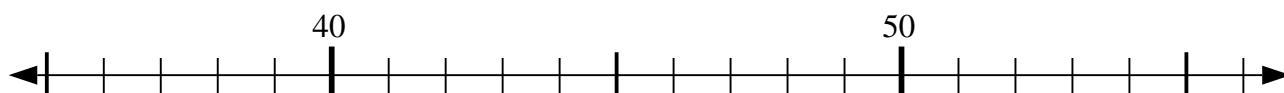
8) $49 + 3 = ?$



9) $22 - 9 = ?$



10) $42 - 4 = ?$



Risposte

1. _____

2. _____

3. _____

4. _____

5. _____

6. _____

7. _____

8. _____

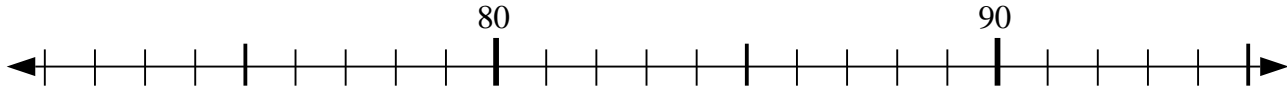
9. _____

10. _____

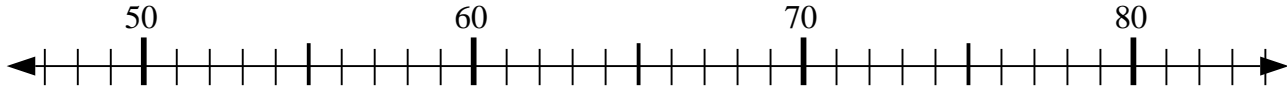


Usa la linea numerata per risolvere il problema.

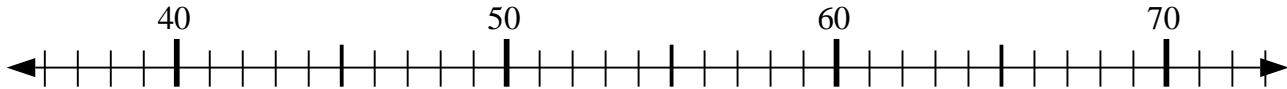
1) $79 + 14 = ?$



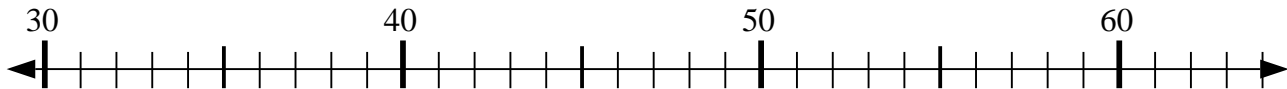
2) $53 - 0 = ?$



3) $42 + 1 = ?$



4) $41 - 2 = ?$



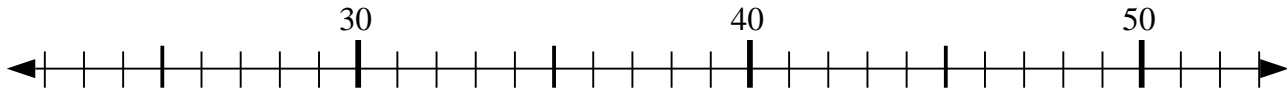
5) $32 - 9 = ?$



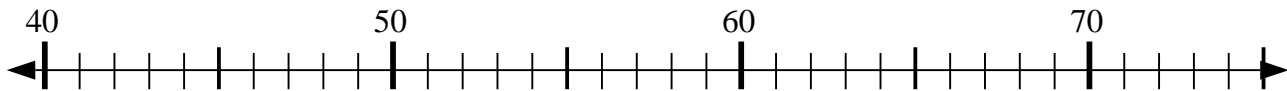
6) $40 - 3 = ?$



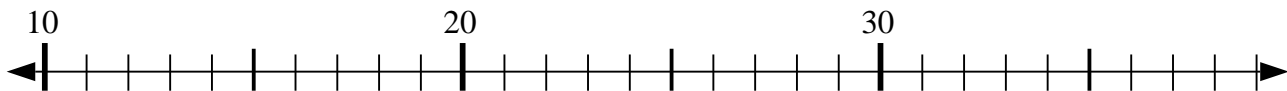
7) $30 + 11 = ?$



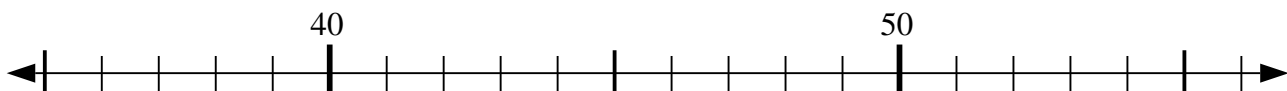
8) $49 + 3 = ?$



9) $22 - 9 = ?$



10) $42 - 4 = ?$



Risposte

1. 93

2. 53

3. 43

4. 39

5. 23

6. 37

7. 41

8. 52

9. 13

10. 38