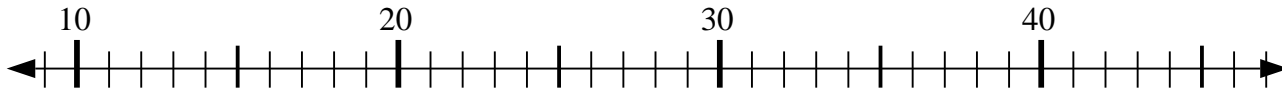


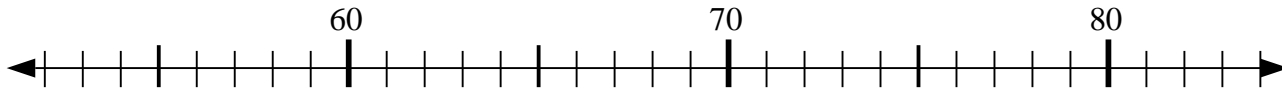


Usa la linea numerata per risolvere il problema.

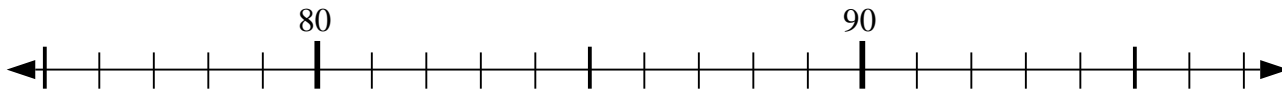
1)  $14 - 4 = ?$



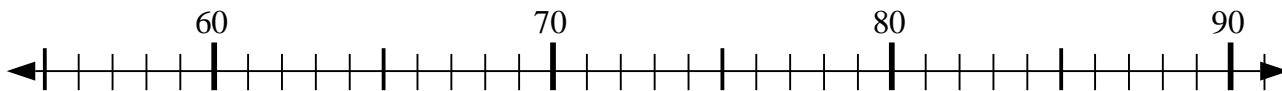
2)  $60 - 6 = ?$



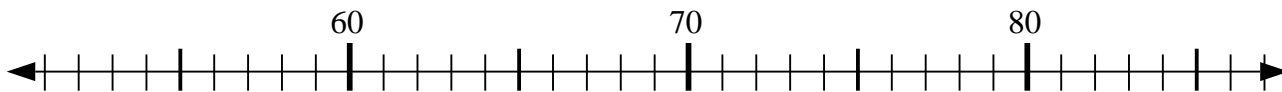
3)  $84 - 7 = ?$



4)  $77 - 19 = ?$



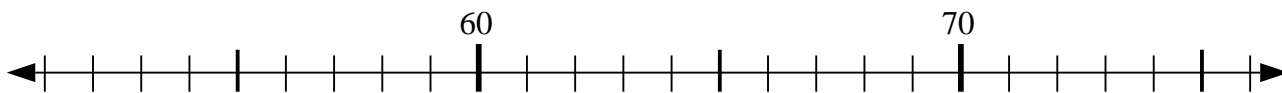
5)  $56 + 6 = ?$



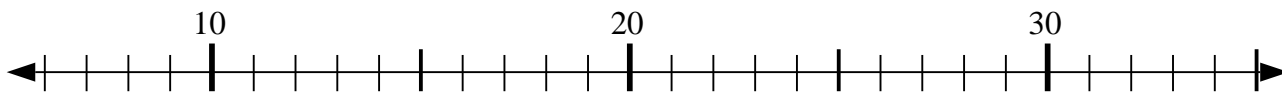
6)  $54 + 27 = ?$



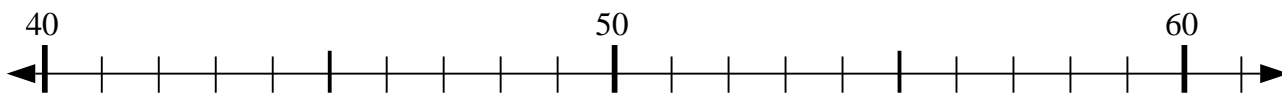
7)  $55 + 11 = ?$



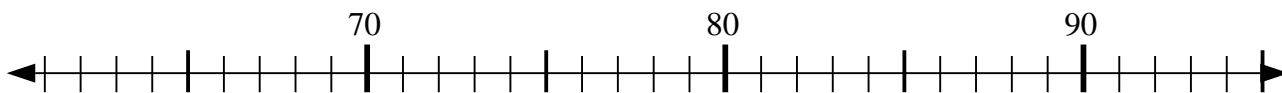
8)  $31 - 9 = ?$



9)  $57 + 2 = ?$



10)  $69 + 1 = ?$



**Risposte**

1. \_\_\_\_\_

2. \_\_\_\_\_

3. \_\_\_\_\_

4. \_\_\_\_\_

5. \_\_\_\_\_

6. \_\_\_\_\_

7. \_\_\_\_\_

8. \_\_\_\_\_

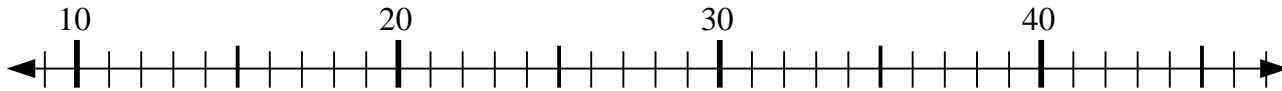
9. \_\_\_\_\_

10. \_\_\_\_\_

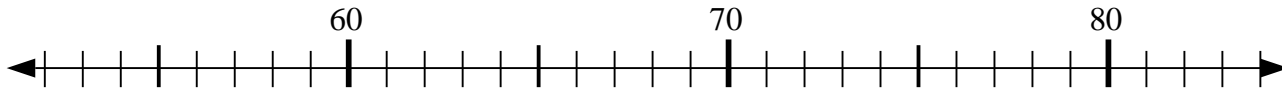


Usa la linea numerata per risolvere il problema.

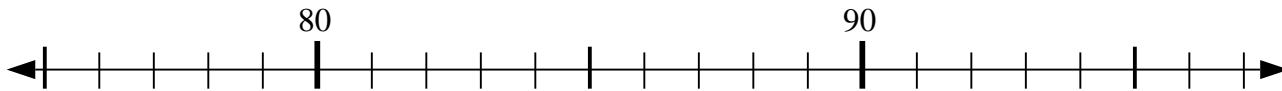
1)  $14 - 4 = ?$



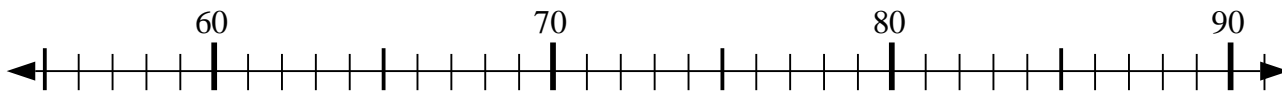
2)  $60 - 6 = ?$



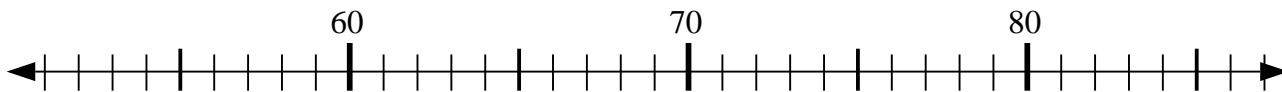
3)  $84 - 7 = ?$



4)  $77 - 19 = ?$



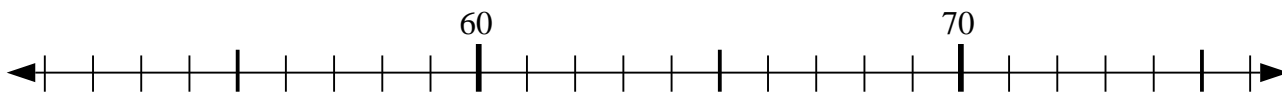
5)  $56 + 6 = ?$



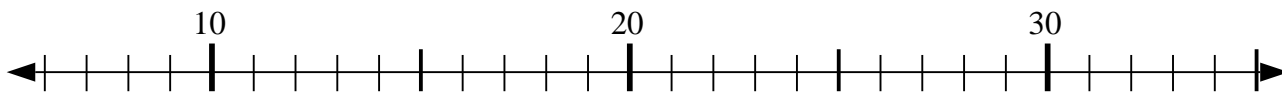
6)  $54 + 27 = ?$



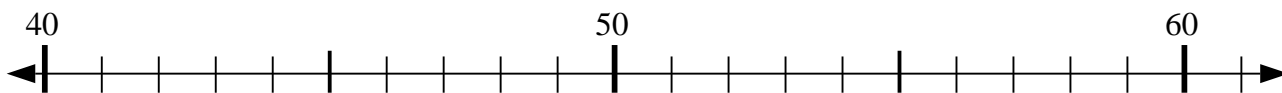
7)  $55 + 11 = ?$



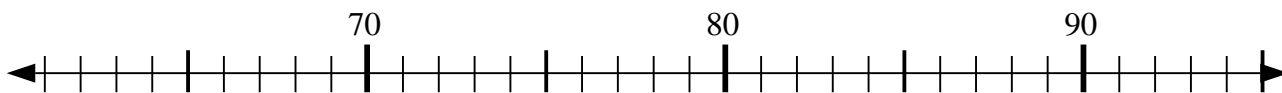
8)  $31 - 9 = ?$



9)  $57 + 2 = ?$



10)  $69 + 1 = ?$



**Risposte**

1. 10

2. 54

3. 77

4. 58

5. 62

6. 81

7. 66

8. 22

9. 59

10. 70