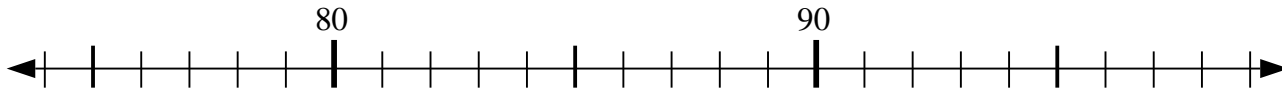


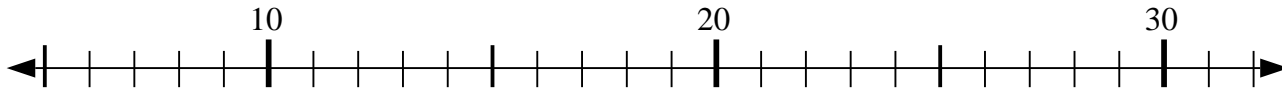


Usa la linea numerata per risolvere il problema.

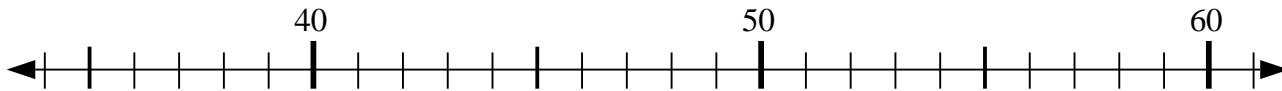
1) $80 - 6 = ?$



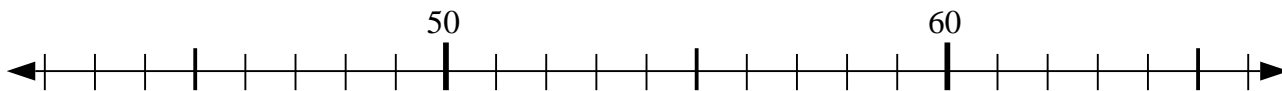
2) $8 + 2 = ?$



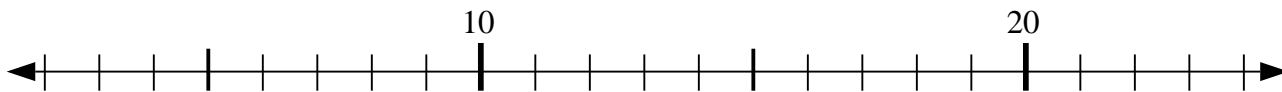
3) $36 + 19 = ?$



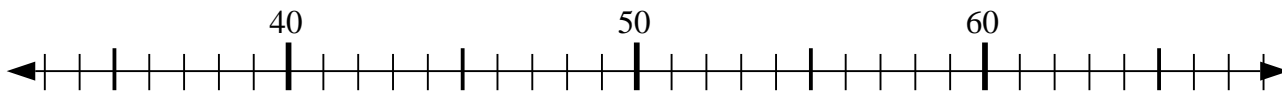
4) $54 - 0 = ?$



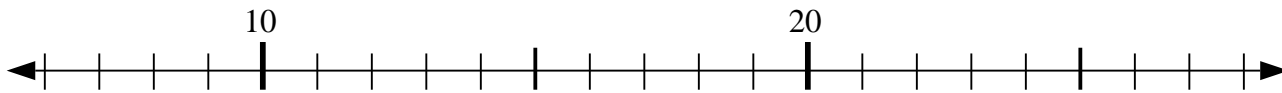
5) $14 - 8 = ?$



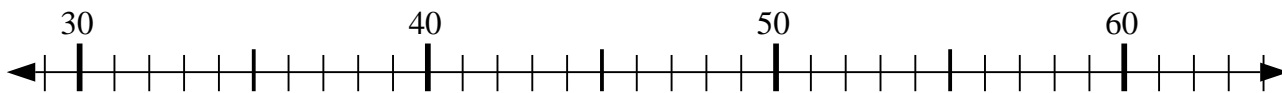
6) $37 + 4 = ?$



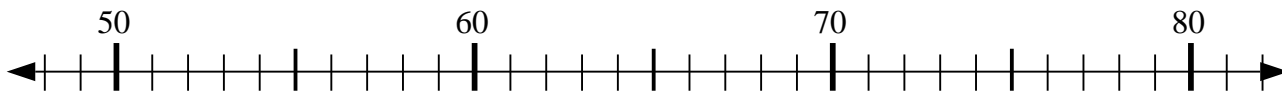
7) $27 - 0 = ?$



8) $45 - 16 = ?$



9) $61 + 5 = ?$



10) $69 - 8 = ?$



Risposte

1. _____

2. _____

3. _____

4. _____

5. _____

6. _____

7. _____

8. _____

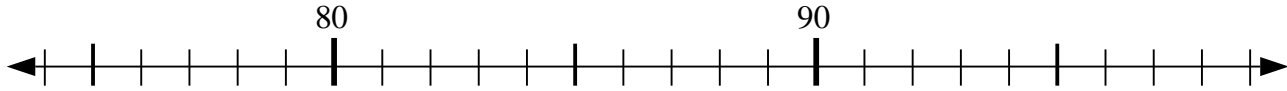
9. _____

10. _____

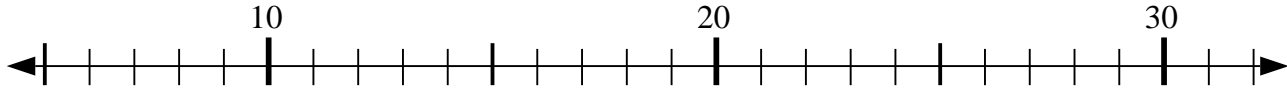


Usa la linea numerata per risolvere il problema.

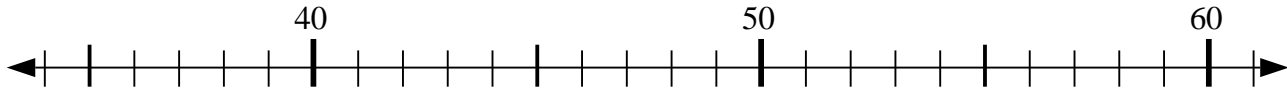
1) $80 - 6 = ?$



2) $8 + 2 = ?$



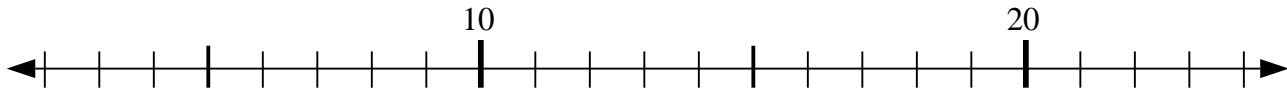
3) $36 + 19 = ?$



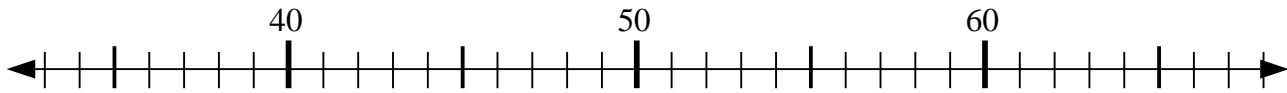
4) $54 - 0 = ?$



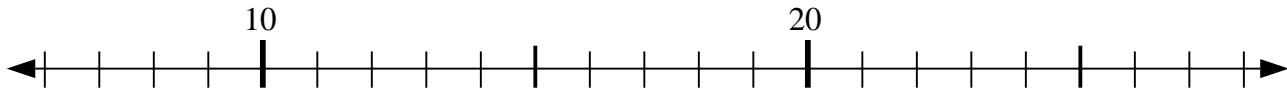
5) $14 - 8 = ?$



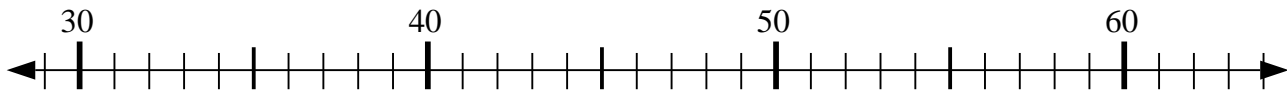
6) $37 + 4 = ?$



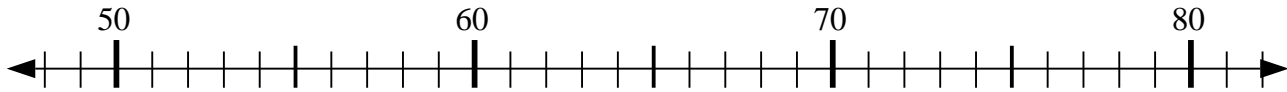
7) $27 - 0 = ?$



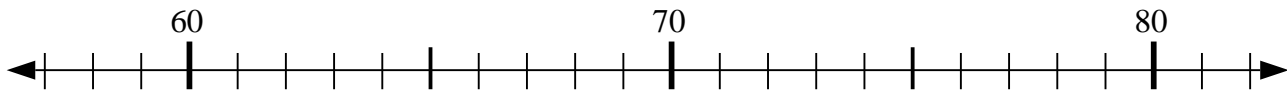
8) $45 - 16 = ?$



9) $61 + 5 = ?$



10) $69 - 8 = ?$



Risposte

1. 74

2. 10

3. 55

4. 54

5. 6

6. 41

7. 27

8. 29

9. 66

10. 61