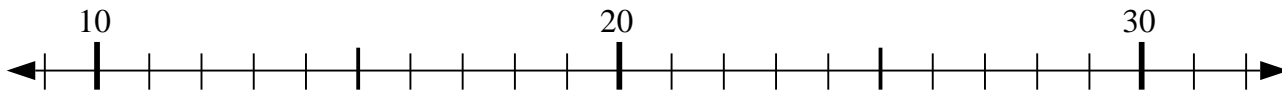


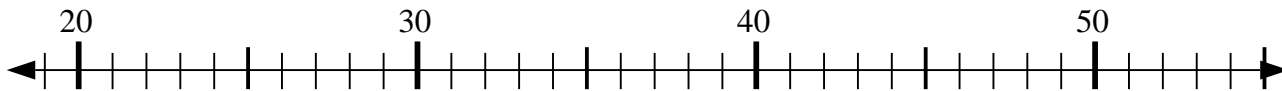


Usa la linea numerata per risolvere il problema.

1) $15 + 1 = ?$



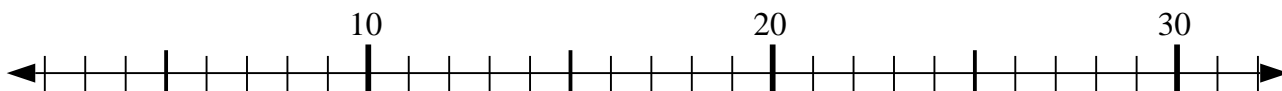
2) $31 - 0 = ?$



3) $56 - 23 = ?$



4) $21 + 4 = ?$



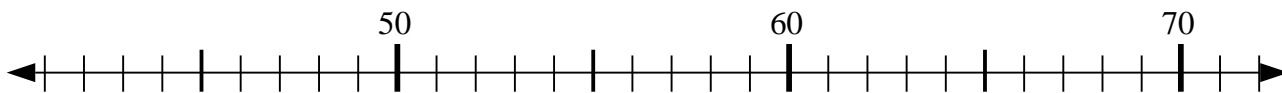
5) $52 - 11 = ?$



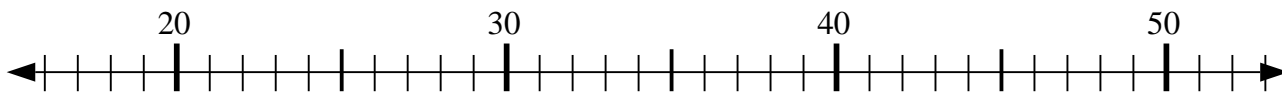
6) $14 + 14 = ?$



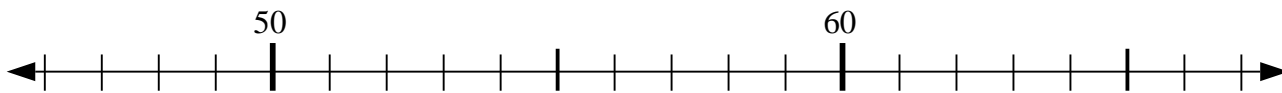
7) $67 + 2 = ?$



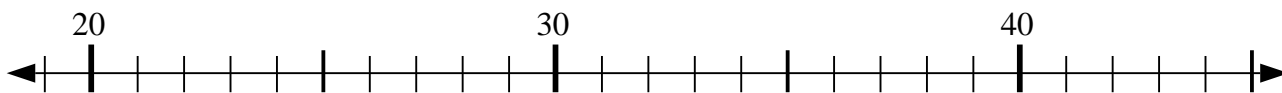
8) $26 + 5 = ?$



9) $52 - 5 = ?$



10) $29 + 5 = ?$



Risposte

1. _____

2. _____

3. _____

4. _____

5. _____

6. _____

7. _____

8. _____

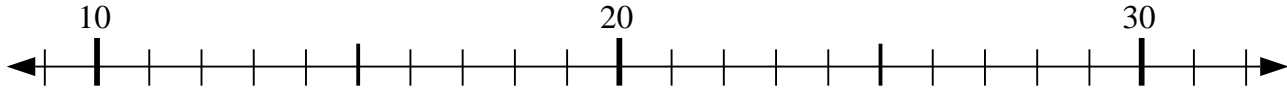
9. _____

10. _____

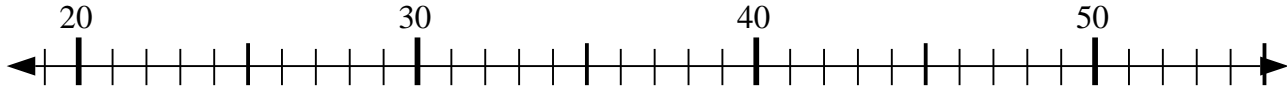


Usa la linea numerata per risolvere il problema.

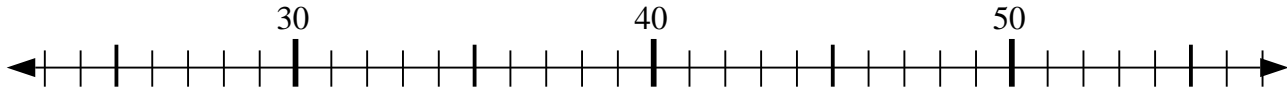
1) $15 + 1 = ?$



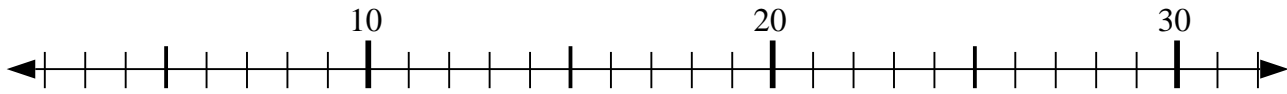
2) $31 - 0 = ?$



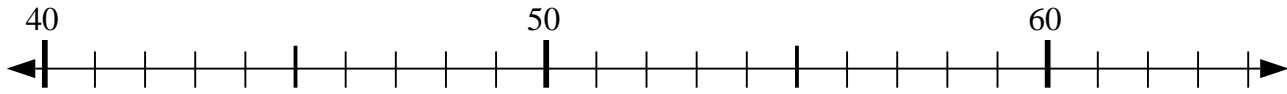
3) $56 - 23 = ?$



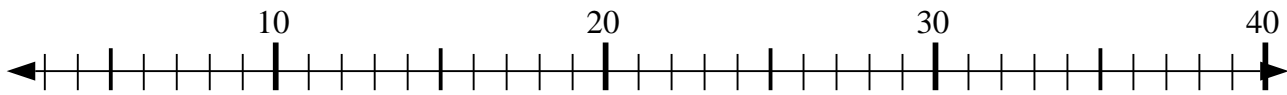
4) $21 + 4 = ?$



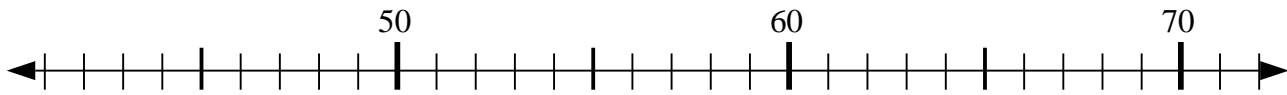
5) $52 - 11 = ?$



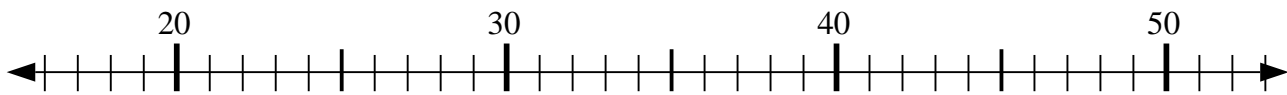
6) $14 + 14 = ?$



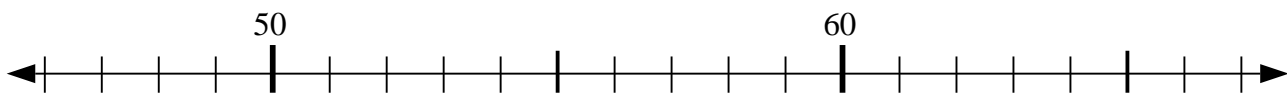
7) $67 + 2 = ?$



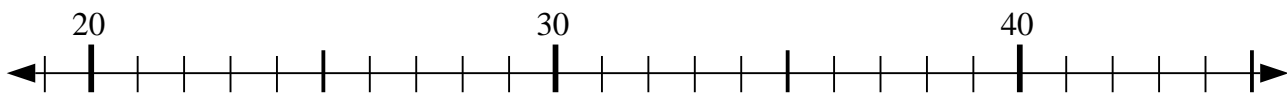
8) $26 + 5 = ?$



9) $52 - 5 = ?$



10) $29 + 5 = ?$



Risposte

1. 16

2. 31

3. 33

4. 25

5. 41

6. 28

7. 69

8. 31

9. 47

10. 34