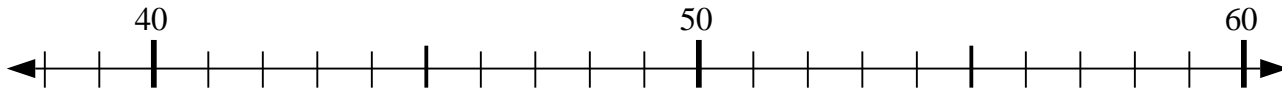


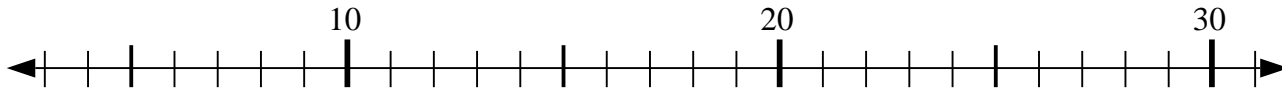


Usa la linea numerata per risolvere il problema.

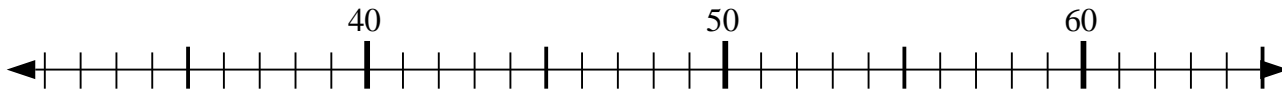
1)  $45 - 5 = ?$



2)  $31 - 27 = ?$




3)  $55 + 4 = ?$



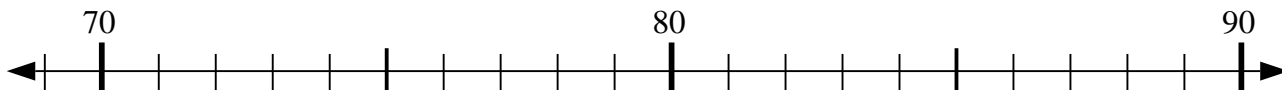
4)  $14 + 17 = ?$



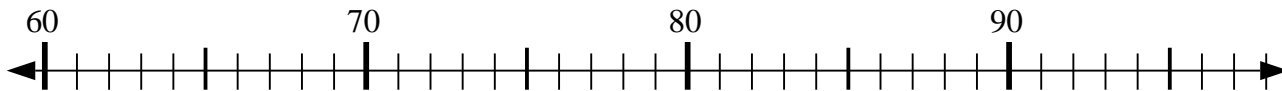
5)  $41 + 4 = ?$



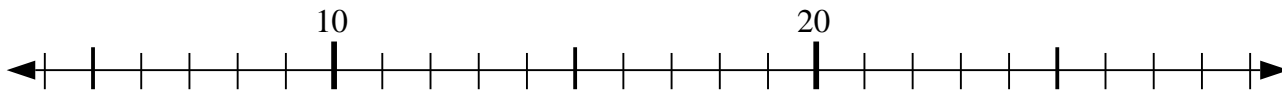
6)  $77 - 3 = ?$



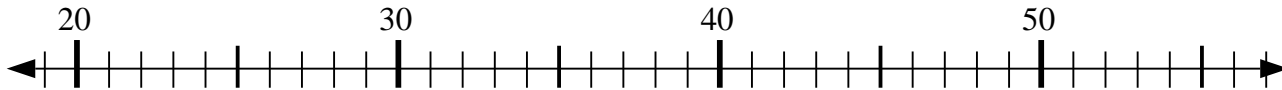
7)  $65 + 7 = ?$



8)  $19 - 4 = ?$



9)  $20 + 6 = ?$



10)  $22 + 5 = ?$



**Risposte**

1. \_\_\_\_\_

2. \_\_\_\_\_

3. \_\_\_\_\_

4. \_\_\_\_\_

5. \_\_\_\_\_

6. \_\_\_\_\_

7. \_\_\_\_\_

8. \_\_\_\_\_

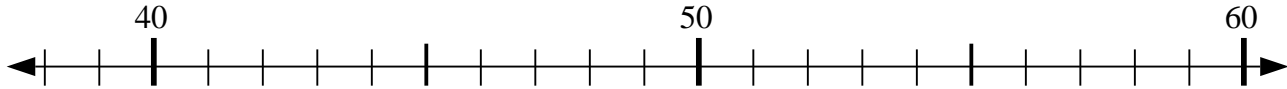
9. \_\_\_\_\_

10. \_\_\_\_\_

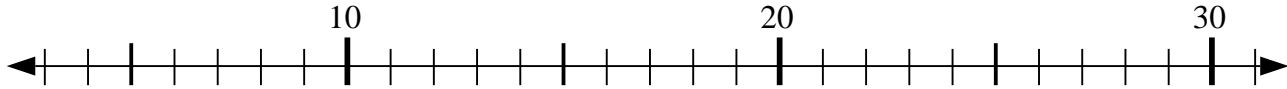


Usa la linea numerata per risolvere il problema.

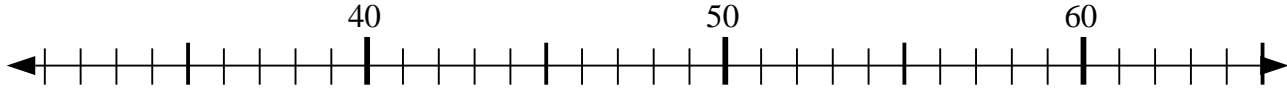
1)  $45 - 5 = ?$



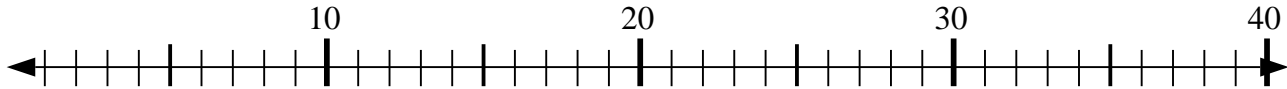
2)  $31 - 27 = ?$



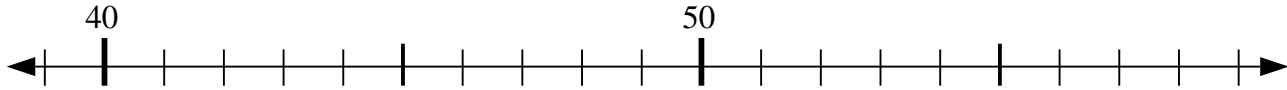
3)  $55 + 4 = ?$



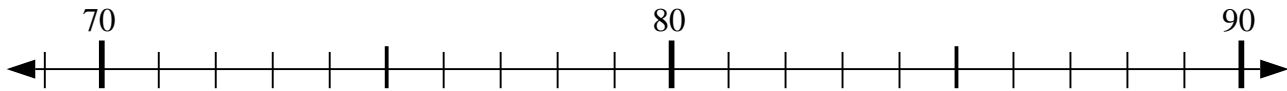
4)  $14 + 17 = ?$



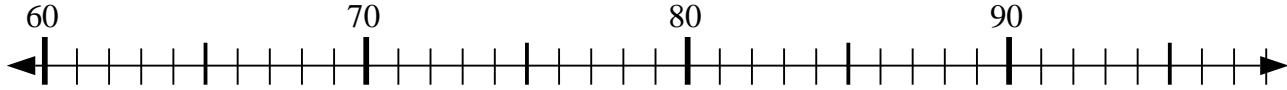
5)  $41 + 4 = ?$



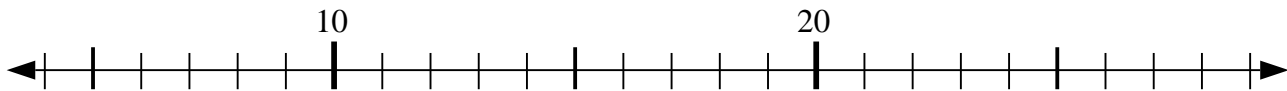
6)  $77 - 3 = ?$



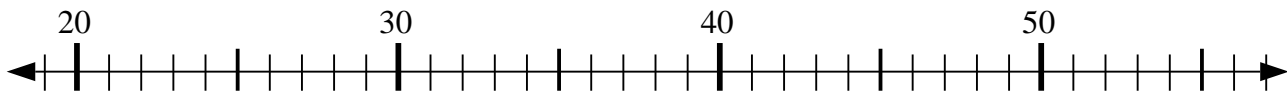
7)  $65 + 7 = ?$



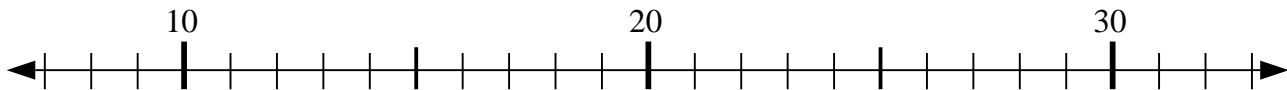
8)  $19 - 4 = ?$



9)  $20 + 6 = ?$



10)  $22 + 5 = ?$



**Risposte**

1. 40

2. 4

3. 59

4. 31

5. 45

6. 74

7. 72

8. 15

9. 26

10. 27