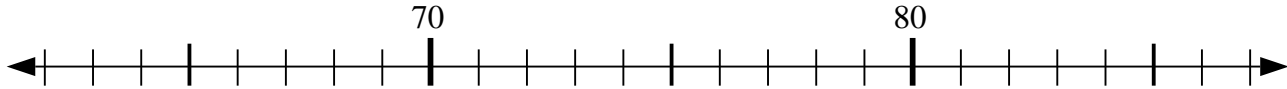


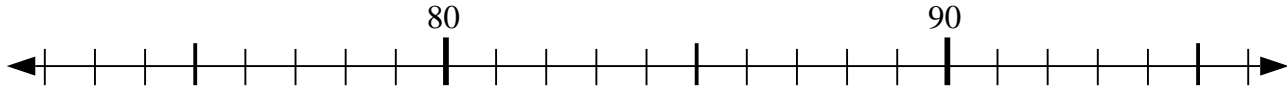


Usa la linea numerata per risolvere il problema.

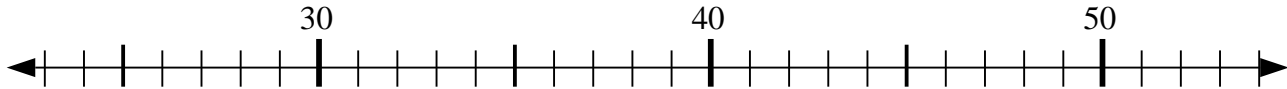
1) $68 - 0 = ?$



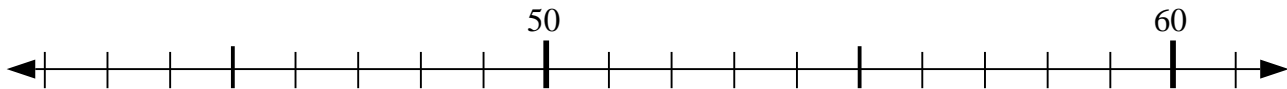
2) $76 + 4 = ?$



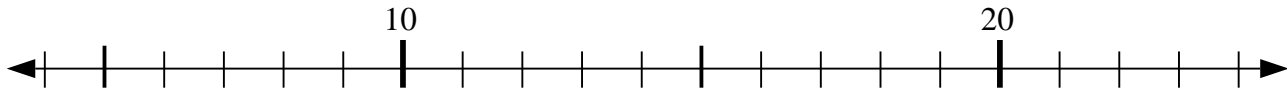
3) $48 - 9 = ?$



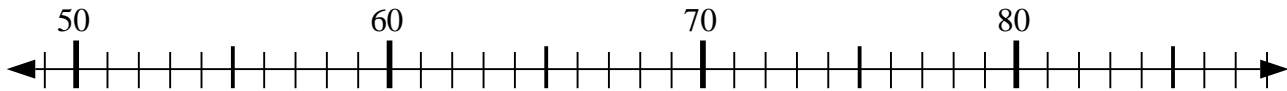
4) $57 - 6 = ?$



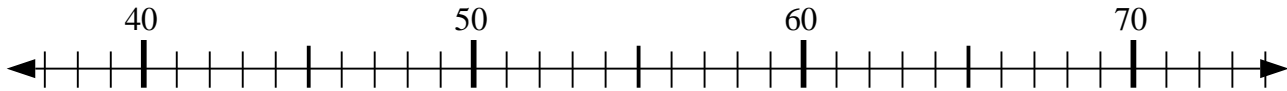
5) $14 + 0 = ?$



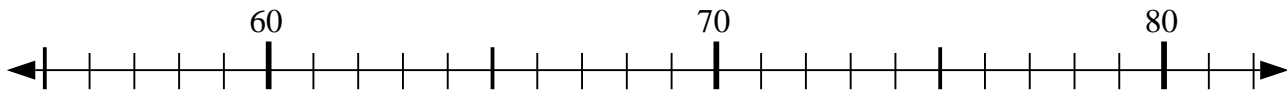
6) $76 + 6 = ?$



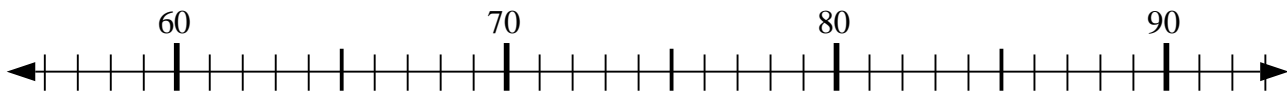
7) $53 + 20 = ?$



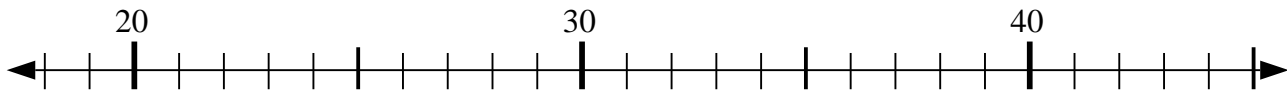
8) $57 + 7 = ?$



9) $61 - 0 = ?$



10) $28 - 4 = ?$



Risposte

1. _____

2. _____

3. _____

4. _____

5. _____

6. _____

7. _____

8. _____

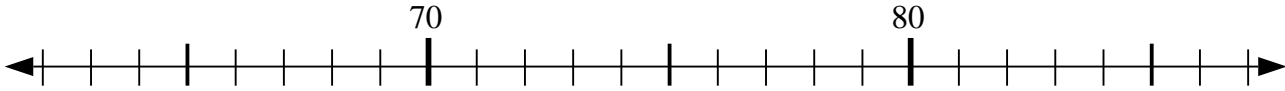
9. _____

10. _____

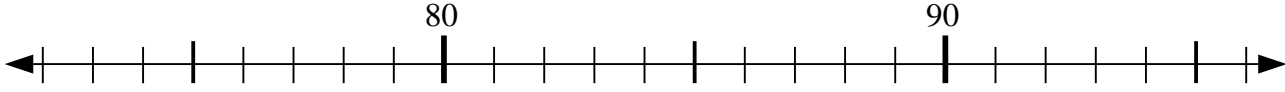


Usa la linea numerata per risolvere il problema.

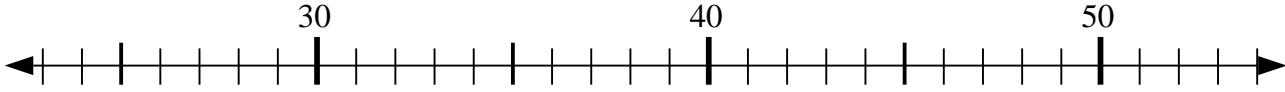
1) $68 - 0 = ?$



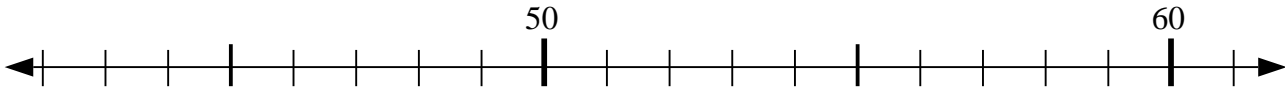
2) $76 + 4 = ?$



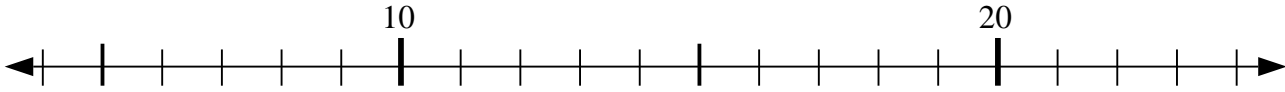
3) $48 - 9 = ?$



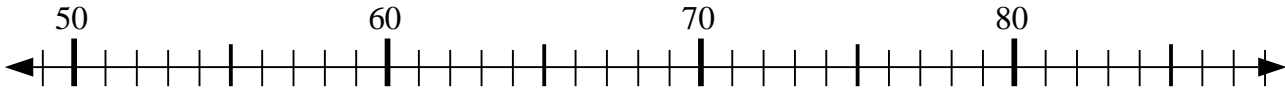
4) $57 - 6 = ?$



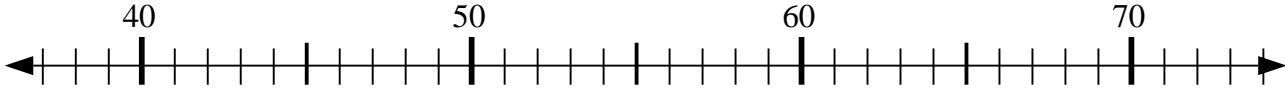
5) $14 + 0 = ?$



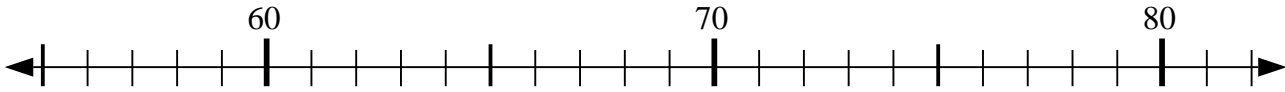
6) $76 + 6 = ?$



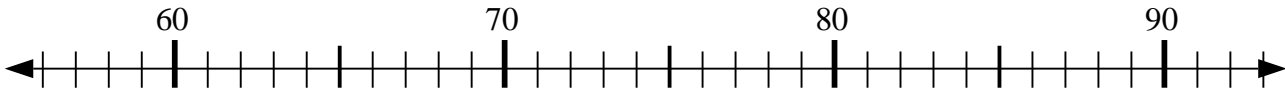
7) $53 + 20 = ?$



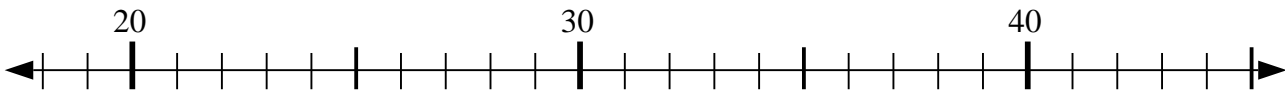
8) $57 + 7 = ?$



9) $61 - 0 = ?$



10) $28 - 4 = ?$



Risposte

1. 68

2. 80

3. 39

4. 51

5. 14

6. 82

7. 73

8. 64

9. 61

10. 24