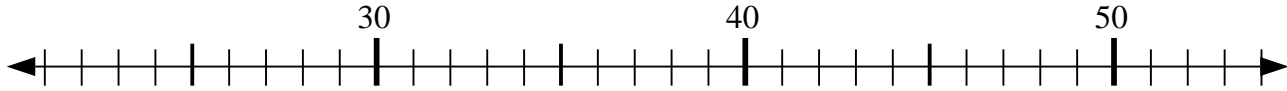


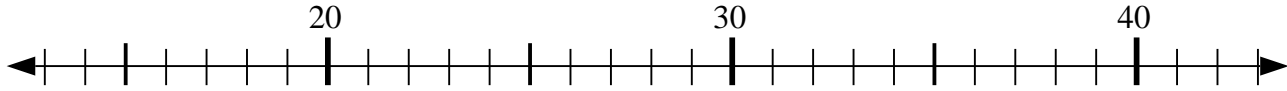


Usa la linea numerata per risolvere il problema.

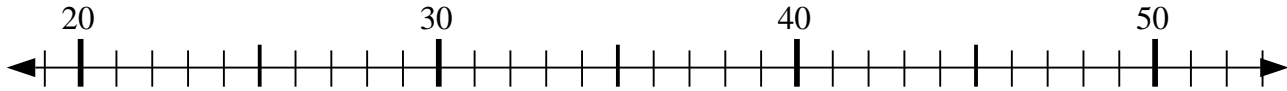
1) $31 + 2 = ?$



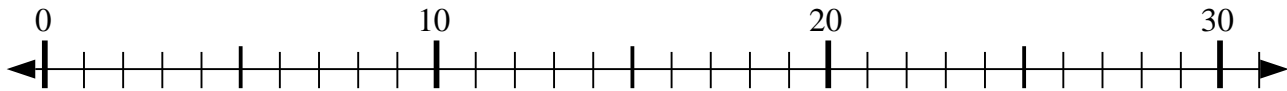
2) $31 - 1 = ?$



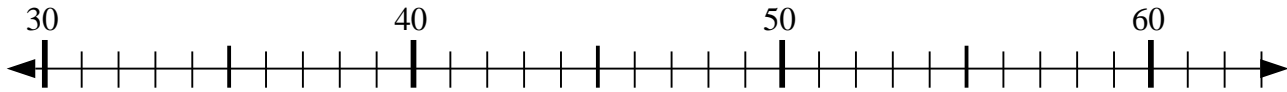
3) $33 + 9 = ?$



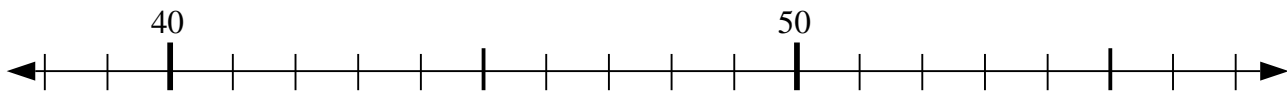
4) $9 + 6 = ?$



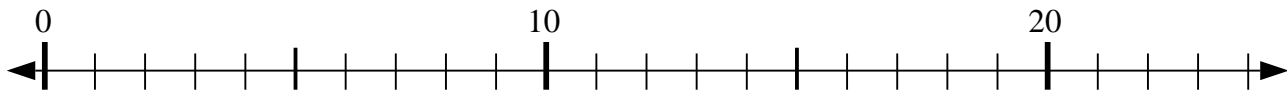
5) $31 + 4 = ?$



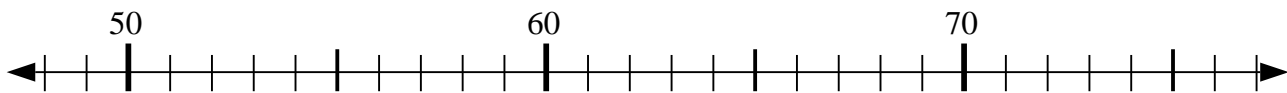
6) $56 - 3 = ?$



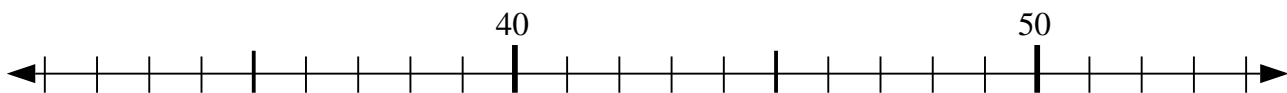
7) $23 - 20 = ?$



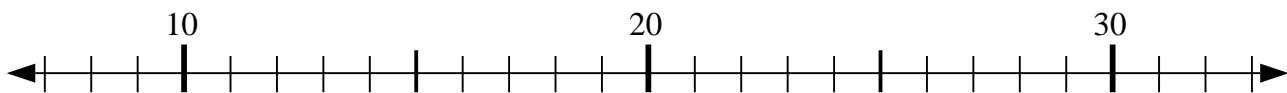
8) $61 + 6 = ?$



9) $46 - 0 = ?$



10) $12 + 8 = ?$



Risposte

1. _____

2. _____

3. _____

4. _____

5. _____

6. _____

7. _____

8. _____

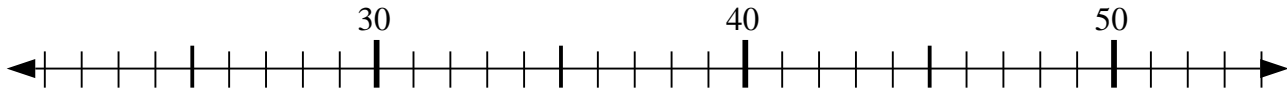
9. _____

10. _____

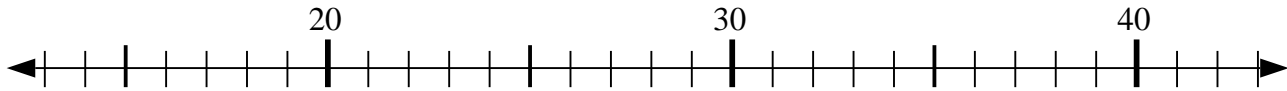


Usa la linea numerata per risolvere il problema.

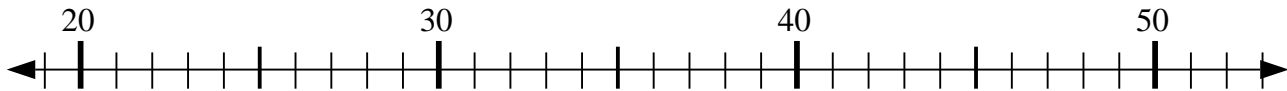
1) $31 + 2 = ?$



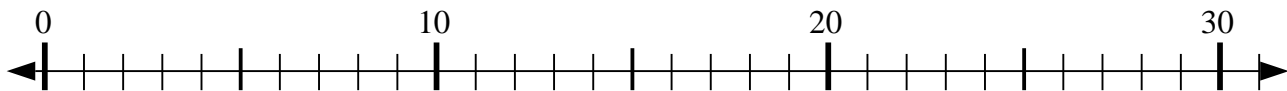
2) $31 - 1 = ?$



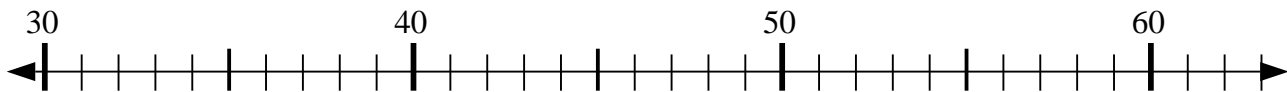
3) $33 + 9 = ?$



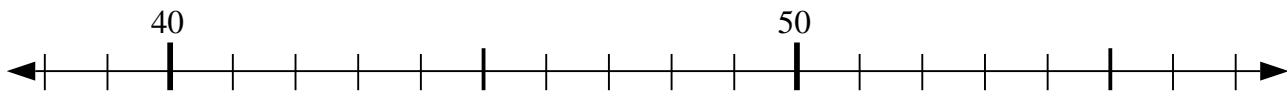
4) $9 + 6 = ?$



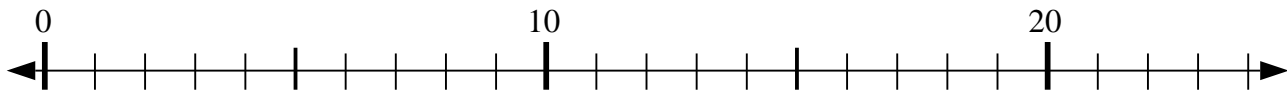
5) $31 + 4 = ?$



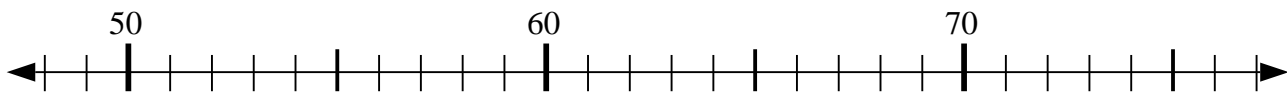
6) $56 - 3 = ?$



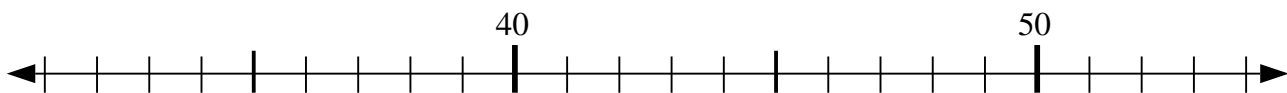
7) $23 - 20 = ?$



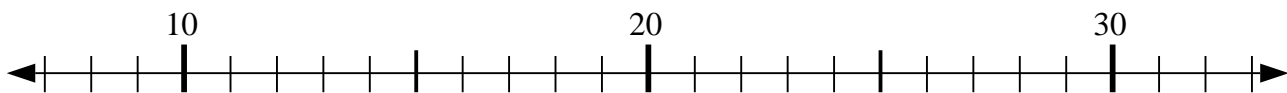
8) $61 + 6 = ?$



9) $46 - 0 = ?$



10) $12 + 8 = ?$



Risposte

1. 33

2. 30

3. 42

4. 15

5. 35

6. 53

7. 3

8. 67

9. 46

10. 20