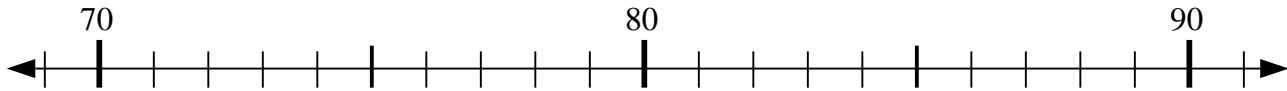


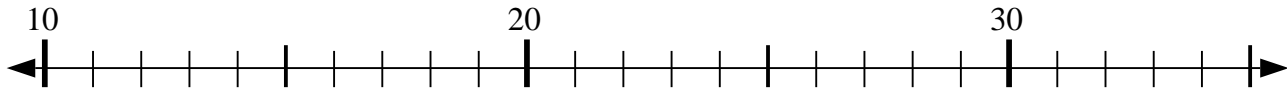


Usa la linea numerata per risolvere il problema.

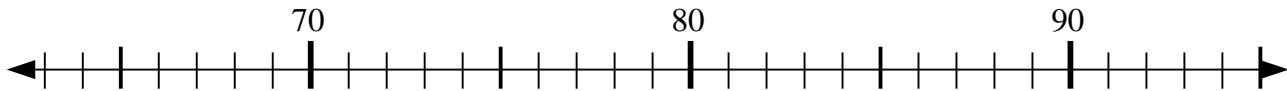
1) $86 + 2 = ?$



2) $28 - 1 = ?$



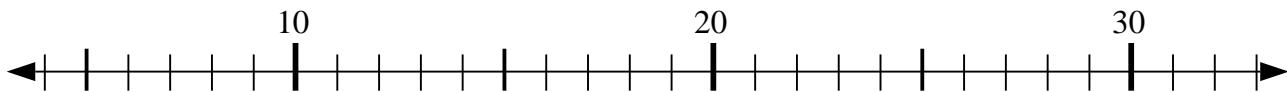
3) $69 + 21 = ?$



4) $50 - 7 = ?$



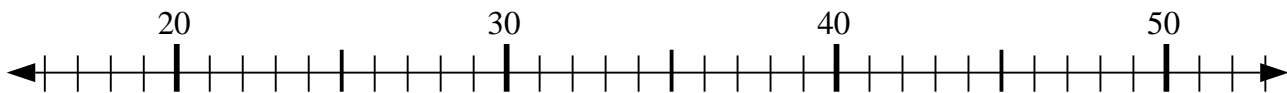
5) $30 - 3 = ?$



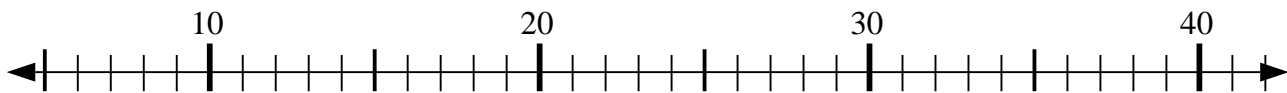
6) $42 - 9 = ?$



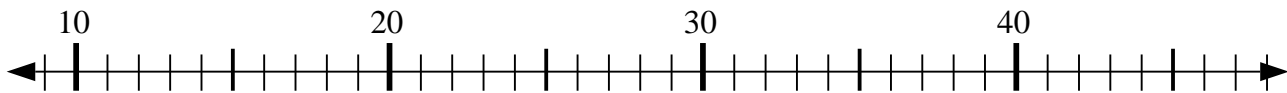
7) $30 - 14 = ?$



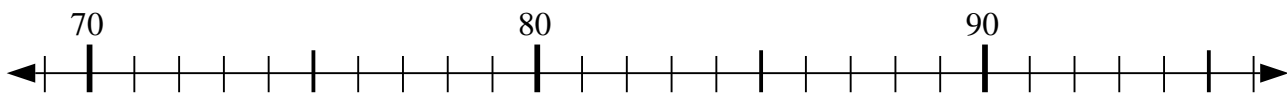
8) $23 - 12 = ?$



9) $11 + 5 = ?$



10) $75 + 5 = ?$



Risposte

1. _____

2. _____

3. _____

4. _____

5. _____

6. _____

7. _____

8. _____

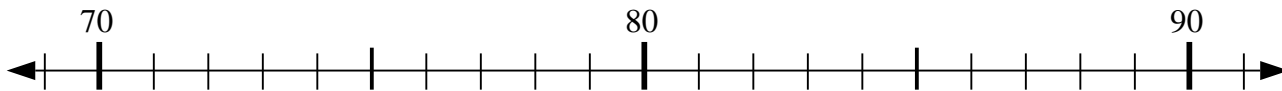
9. _____

10. _____

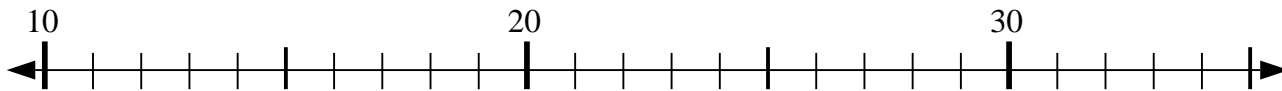


Usa la linea numerata per risolvere il problema.

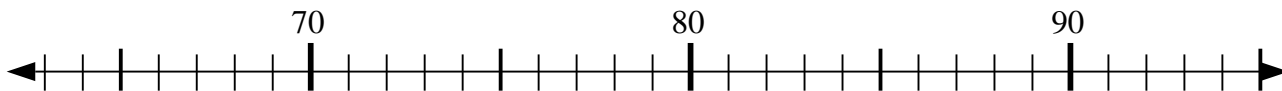
1) $86 + 2 = ?$



2) $28 - 1 = ?$



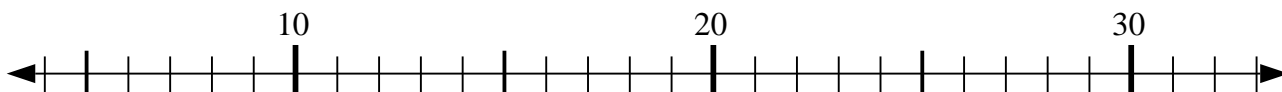
3) $69 + 21 = ?$



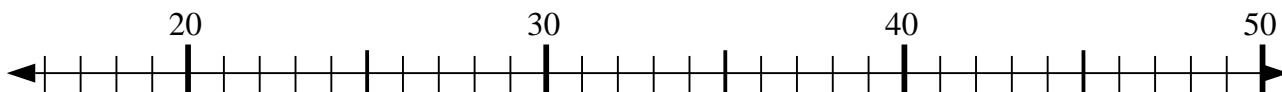
4) $50 - 7 = ?$



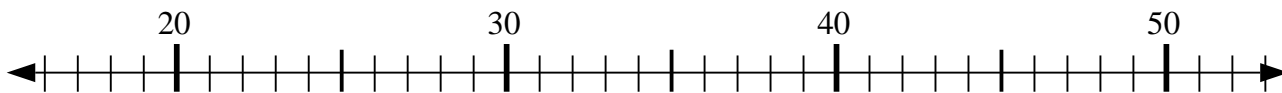
5) $30 - 3 = ?$



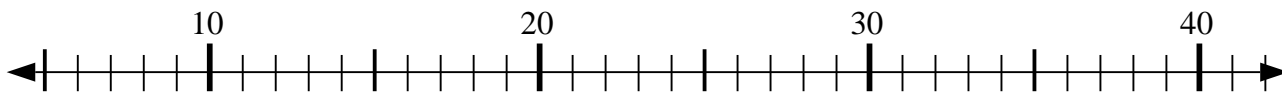
6) $42 - 9 = ?$



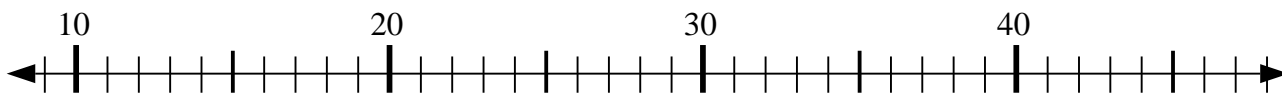
7) $30 - 14 = ?$



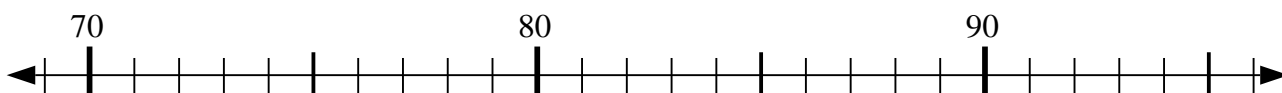
8) $23 - 12 = ?$



9) $11 + 5 = ?$



10) $75 + 5 = ?$



Risposte

1. 88

2. 27

3. 90

4. 43

5. 27

6. 33

7. 16

8. 11

9. 16

10. 80