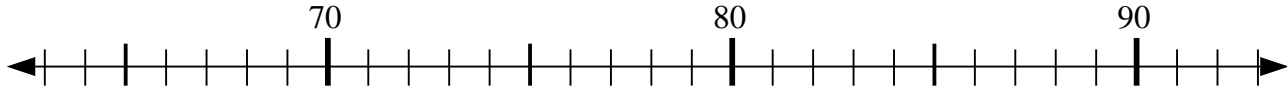


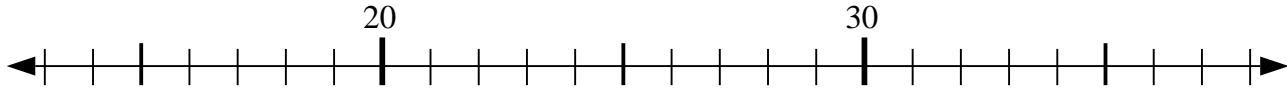


Usa la linea numerata per risolvere il problema.

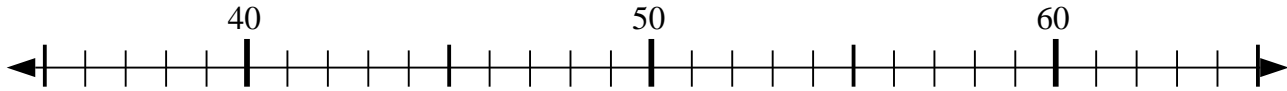
1)  $85 - 2 = ?$



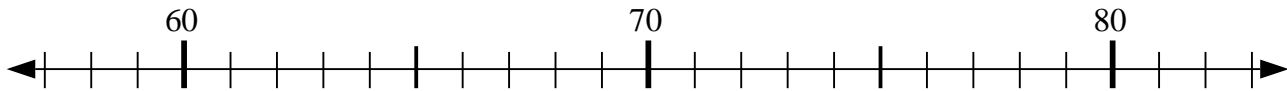
2)  $38 - 16 = ?$



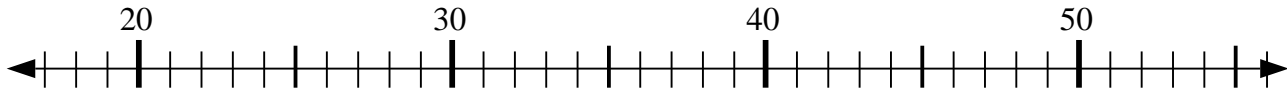
3)  $41 - 3 = ?$



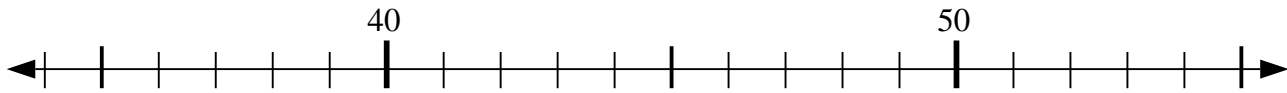
4)  $82 - 20 = ?$



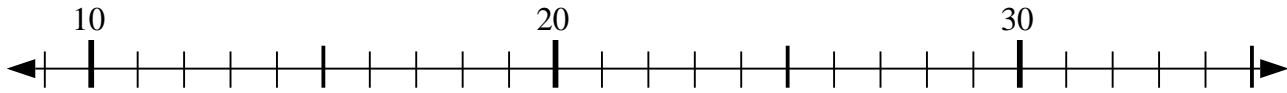
5)  $37 - 3 = ?$



6)  $49 - 14 = ?$



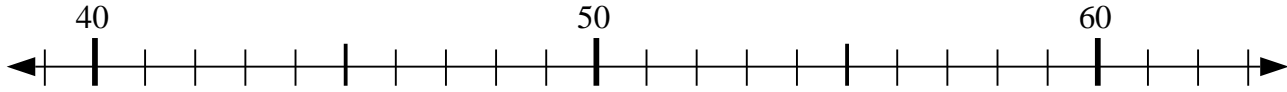
7)  $9 + 15 = ?$



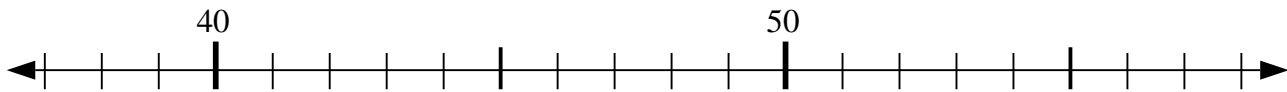
8)  $43 - 15 = ?$



9)  $49 + 6 = ?$



10)  $43 + 3 = ?$



**Risposte**

1. \_\_\_\_\_

2. \_\_\_\_\_

3. \_\_\_\_\_

4. \_\_\_\_\_

5. \_\_\_\_\_

6. \_\_\_\_\_

7. \_\_\_\_\_

8. \_\_\_\_\_

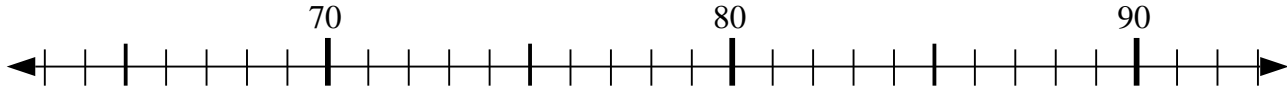
9. \_\_\_\_\_

10. \_\_\_\_\_

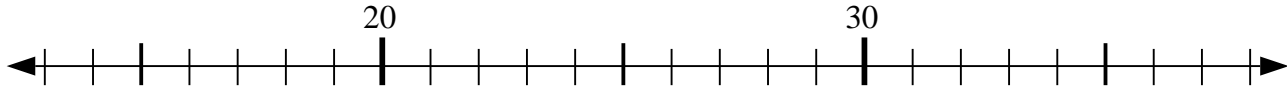


Usa la linea numerata per risolvere il problema.

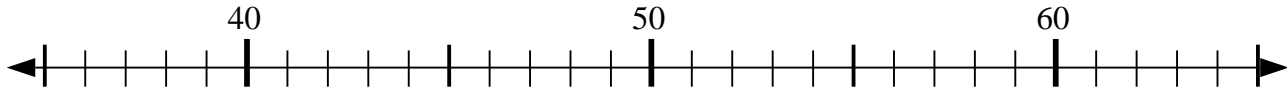
1)  $85 - 2 = ?$



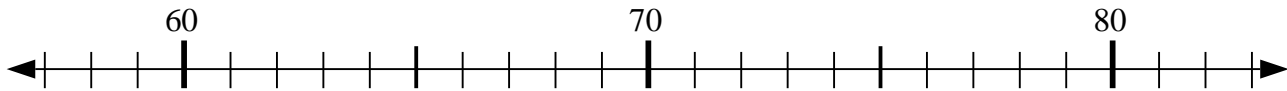
2)  $38 - 16 = ?$



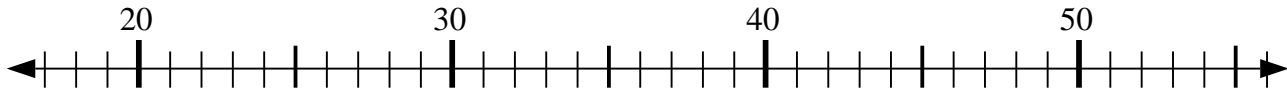
3)  $41 - 3 = ?$



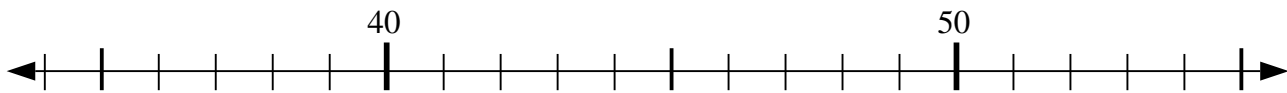
4)  $82 - 20 = ?$



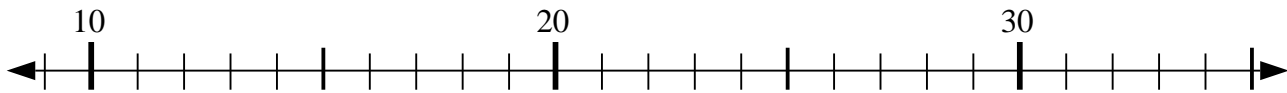
5)  $37 - 3 = ?$



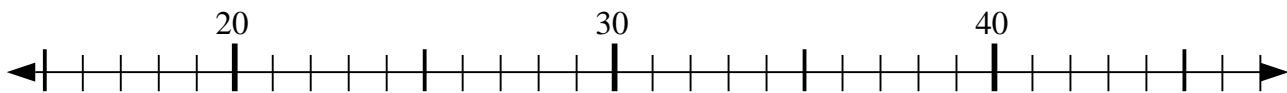
6)  $49 - 14 = ?$



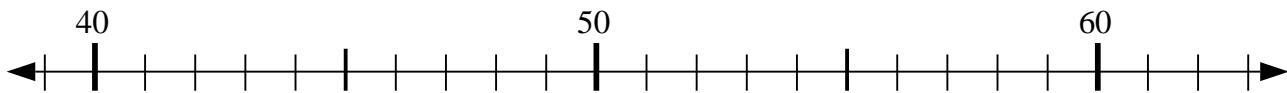
7)  $9 + 15 = ?$



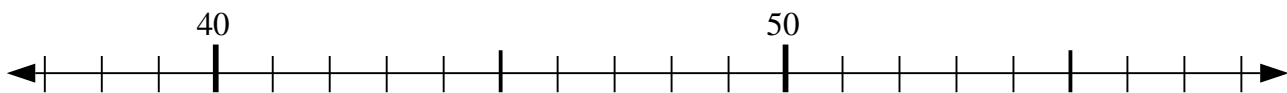
8)  $43 - 15 = ?$



9)  $49 + 6 = ?$



10)  $43 + 3 = ?$



**Risposte**

1. 83

2. 22

3. 38

4. 62

5. 34

6. 35

7. 24

8. 28

9. 55

10. 46