

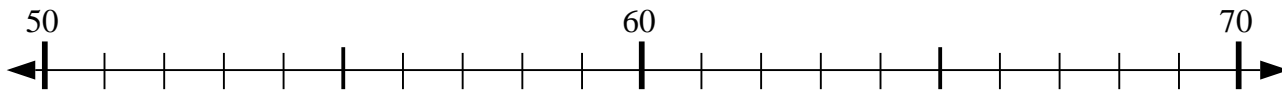


Usa la linea numerata per risolvere il problema.

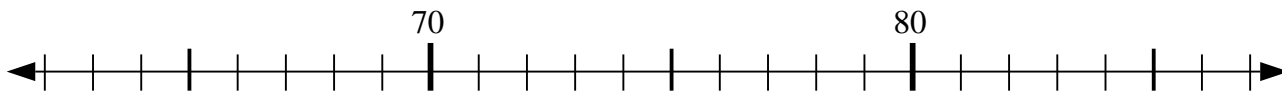
1) $88 - 15 = ?$



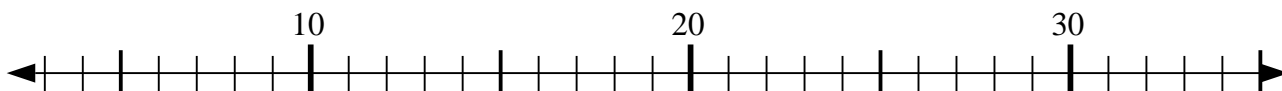
2) $70 - 20 = ?$



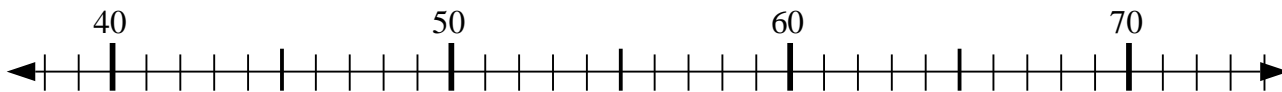
3) $74 + 1 = ?$



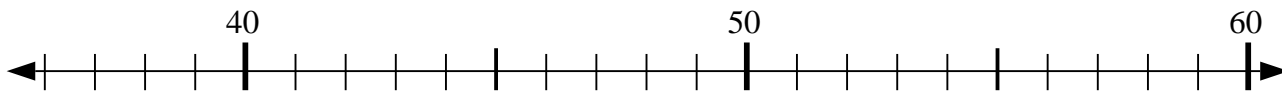
4) $33 + 2 = ?$



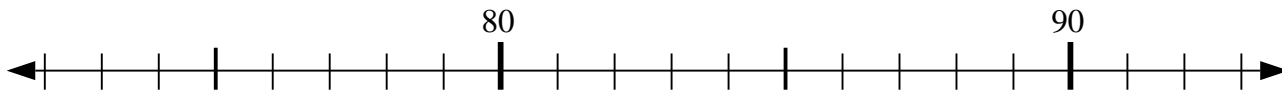
5) $62 - 15 = ?$



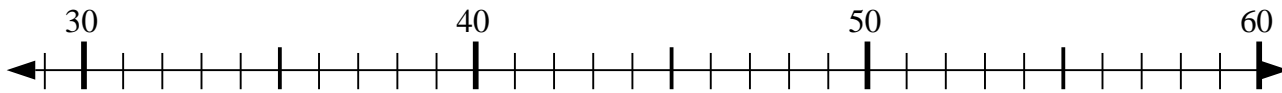
6) $42 + 4 = ?$



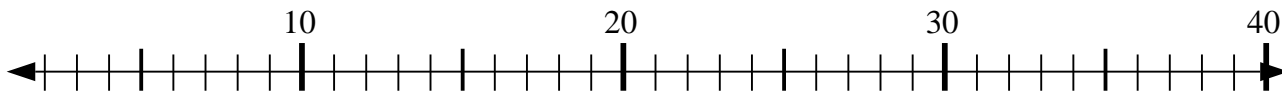
7) $89 - 17 = ?$



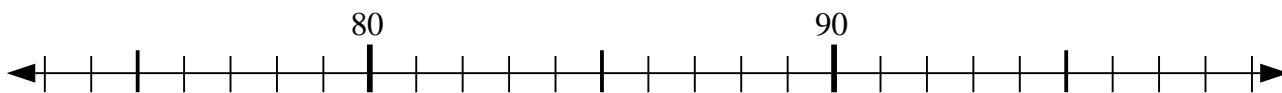
8) $49 - 6 = ?$



9) $7 + 8 = ?$



10) $77 + 10 = ?$



Risposte

1. _____

2. _____

3. _____

4. _____

5. _____

6. _____

7. _____

8. _____

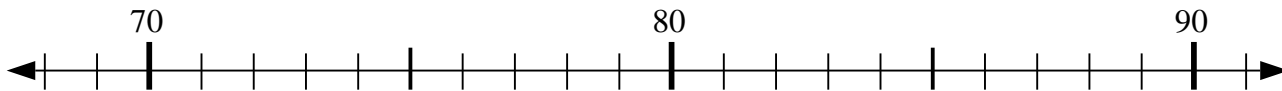
9. _____

10. _____

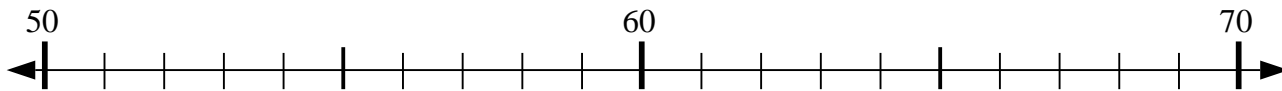


Usa la linea numerata per risolvere il problema.

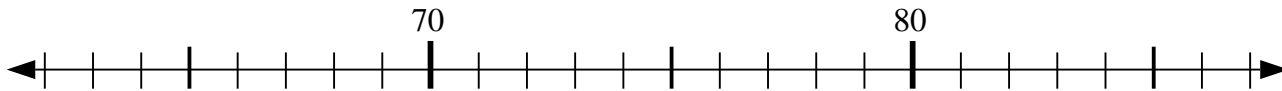
1) $88 - 15 = ?$



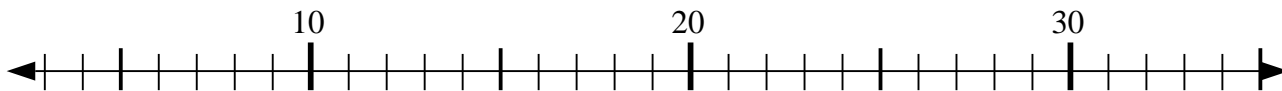
2) $70 - 20 = ?$



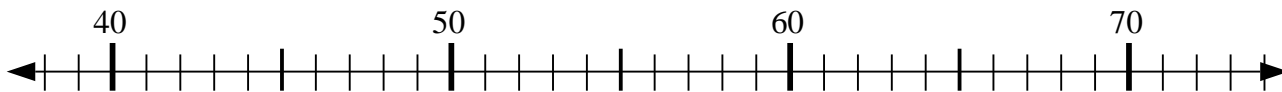
3) $74 + 1 = ?$



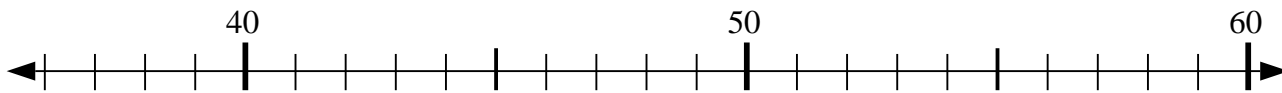
4) $33 + 2 = ?$



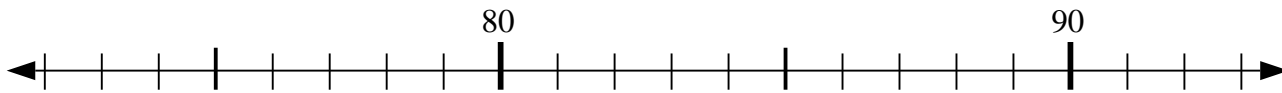
5) $62 - 15 = ?$



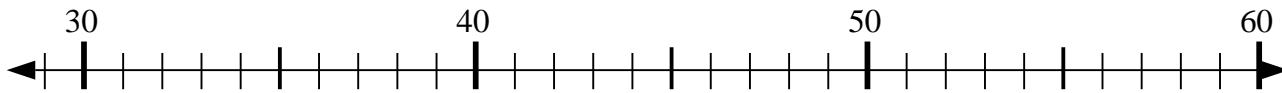
6) $42 + 4 = ?$



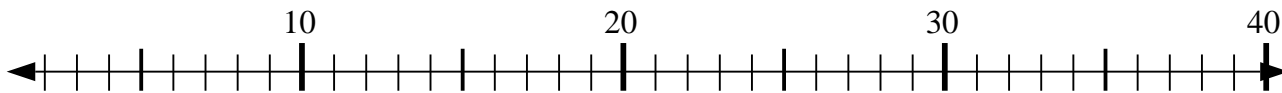
7) $89 - 17 = ?$



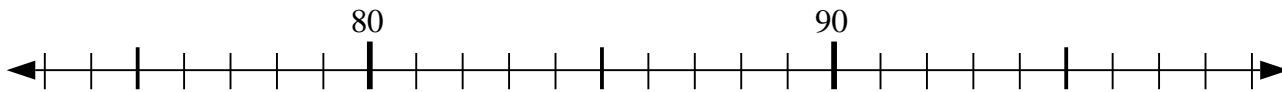
8) $49 - 6 = ?$



9) $7 + 8 = ?$



10) $77 + 10 = ?$



Risposte

1. 73

2. 50

3. 75

4. 35

5. 47

6. 46

7. 72

8. 43

9. 15

10. 87